




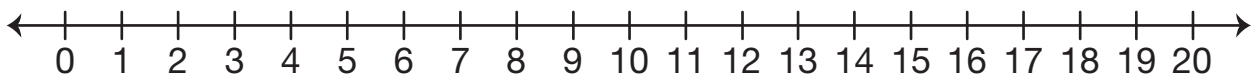
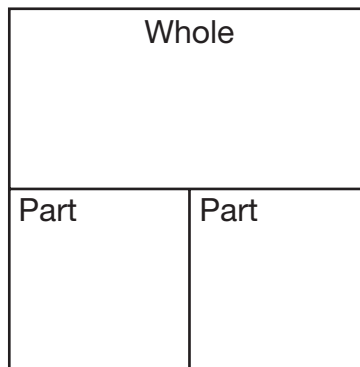


# Animal Trading Cards

Show or tell how to solve the problems using each tool. Write a number sentence.

				
Pod of Whales <b>5¢</b>	Troop of Monkeys <b>6¢</b>	Pride of Lions <b>7¢</b>	Army of Ants <b>8¢</b>	Litter of Puppies <b>9¢</b>

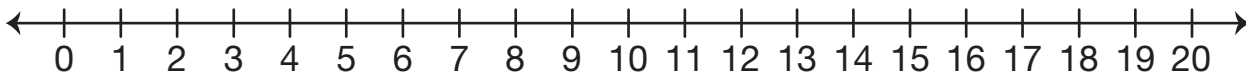
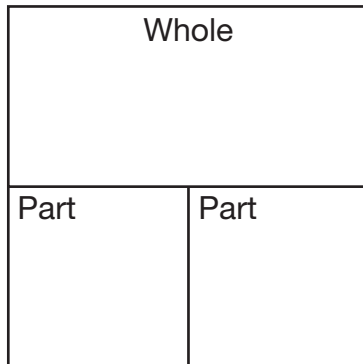
1. Julia bought a monkey card and an ant card. How much did she spend?



Number sentence \_\_\_\_\_

2. Miguel wants to get two animal cards. He has 12¢. He picks the lion card first.

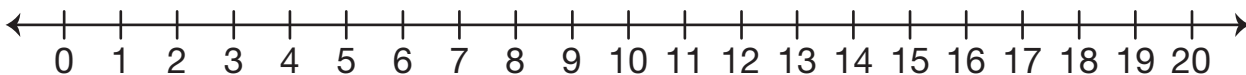
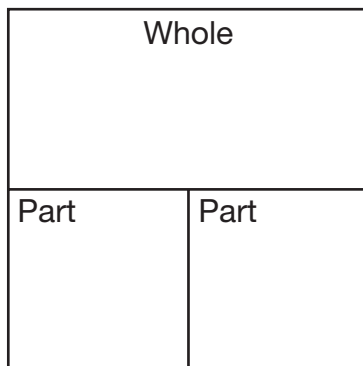
What other card can he buy? \_\_\_\_\_



Number sentence \_\_\_\_\_

3. Rosa has a nickel. She wants to buy a puppy card.

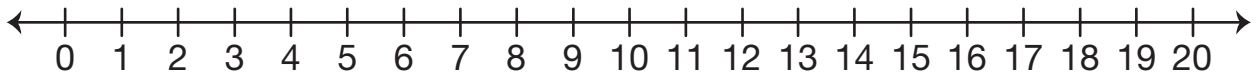
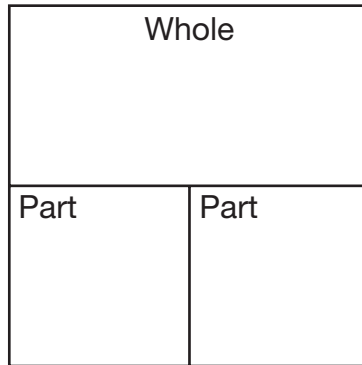
How much more money does she need? \_\_\_\_\_



Number sentence \_\_\_\_\_

4. Kim had 17¢. She bought one card. She had a dime left over.

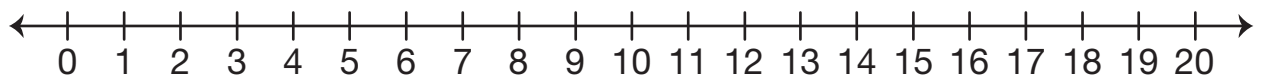
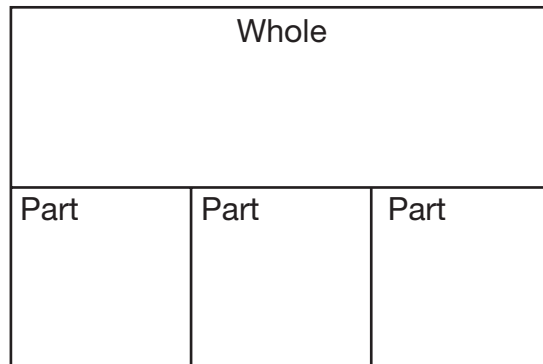
What trading card did Kim buy? \_\_\_\_\_



Number sentence \_\_\_\_\_

5. Jason bought a monkey card, a whale card, and an ant card.

How much did he spend? \_\_\_\_\_



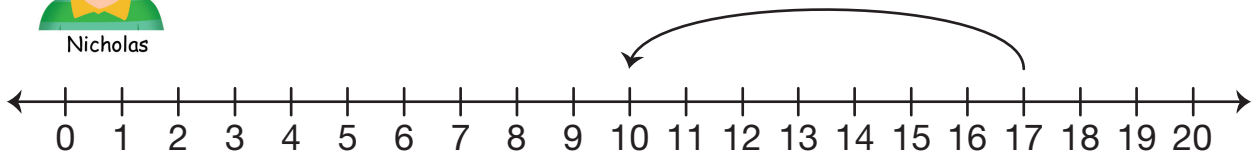
Number sentence \_\_\_\_\_

6. Kim had 17¢. She bought one card. She had a dime left over. What trading card did Kim buy?

Nicholas started to solve the problem this way:



Nicholas



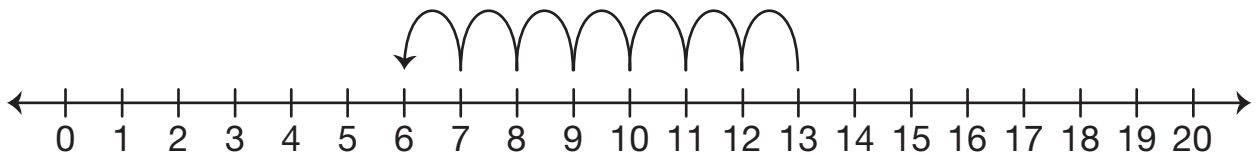
Help him finish his solution.

Number sentence \_\_\_\_\_

7. Nisha has 13¢. She wants to buy an ant card. What other card can she buy?

Emily solved the problem this way: \_\_\_\_\_

I counted back on the number line.  
I started at 13 and counted back  
8: 13, 12, 11, 10, 9, 8, 7, 6.  
She can buy a monkey card.



A. Do you agree with Emily? Why or why not?

---

---

---

B. Show or tell how you would solve the problem.

Number sentence \_\_\_\_\_