




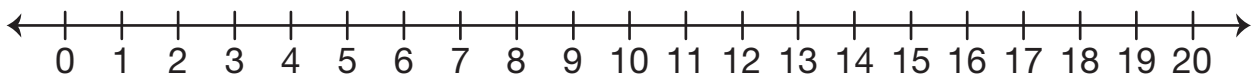
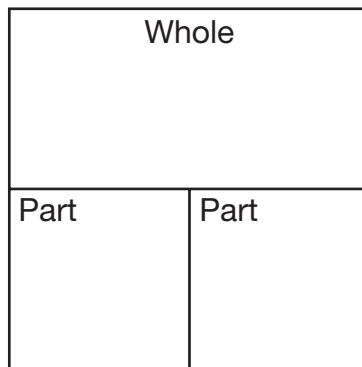


Animal Trading Cards

Show or tell how to solve the problems using each tool. Write a number sentence.

				
Pod of Whales 5¢	Troop of Monkeys 6¢	Pride of Lions 7¢	Army of Ants 8¢	Litter of Puppies 9¢

- Julia bought a monkey card and an ant card. How much did she spend?



Number sentence _____