





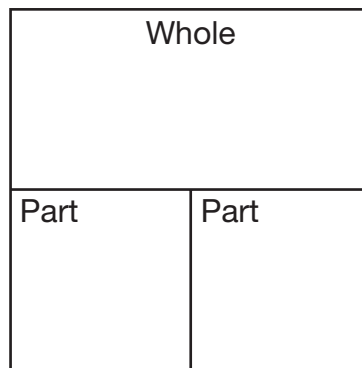


Trading Cards Problems

 Flock of Sheep 4¢	 Pod of Whales 5¢	 Troop of Monkeys 6¢	 Pride of Lions 7¢	 Army of Ants 8¢	 Litter of Puppies 9¢
---	--	---	--	---	--

Show or tell how to solve each problem. Write a number sentence for each. Use connecting cubes, drawings, a number line, or a part-whole diagram.

- Emily has 17¢. She bought an ant card. How much does Emily have left? Show how to use a part-whole diagram to model the problem.



Number sentence _____