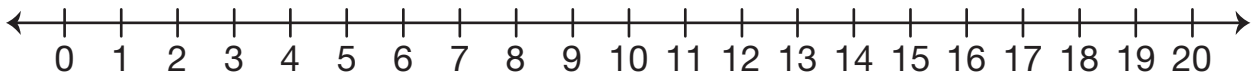


4. Johnny wants a lion card and an ant card. How much money does he need?

Number sentence \_\_\_\_\_

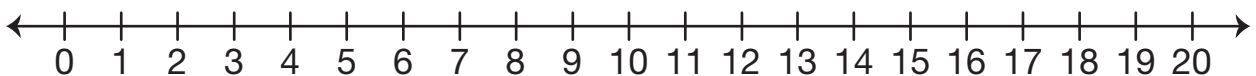
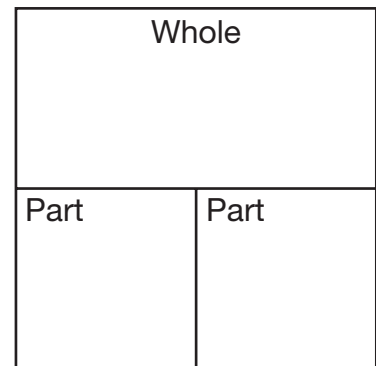
5. Tanya bought a whale card and Peter bought a puppy card. Who spent more money? How much more money did he or she spend?

Show or tell how you solved the problem.



Number sentence \_\_\_\_\_

6. Peter bought a lion card and has 3¢ left. How much money did he have at the start? Show or tell how to solve the problem.



Number sentence \_\_\_\_\_