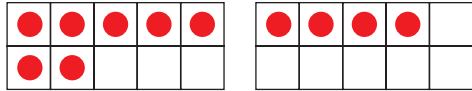


Name _____ Date _____

Reasoning Strategies Practice Menu

Choose two activities from the menu.

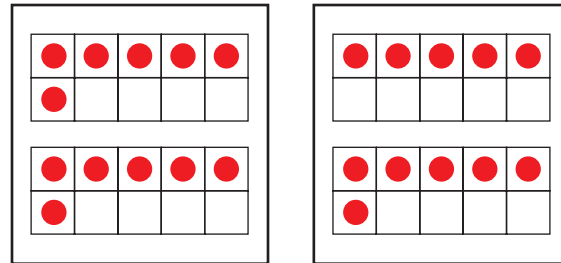
Ten Frame Flash



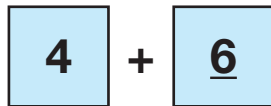
$$7 + 4 = (7 + 3) + 1$$

$$7 + 4 = 11$$

Doubles and Near Doubles Ten Frame Cards

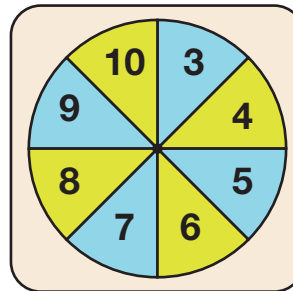


Play Make Ten

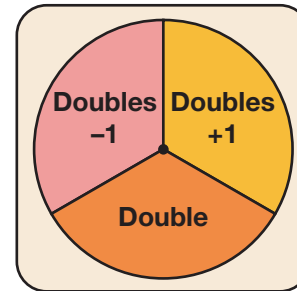


Play Doubles and Near Doubles Bump

Number Spinner



Doubles Spinner



Play Tens Game

