


5. Irma had 16 leaves in her collection. Her brother found 6 more to add to her collection. How many leaves does Irma have now? Help Irma complete her strategy below.



Irma

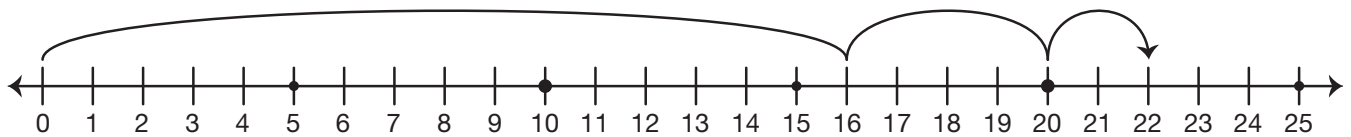
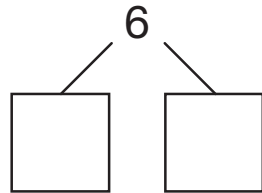
I have 16.
I have to add
6 more.

$$16 + 6$$

What number
do I put with 16
to make 20?

$$16 + \square = 20$$

How can I
split 6 to get the partner
number for 16?



$$16 + 4 + 2 = \square$$