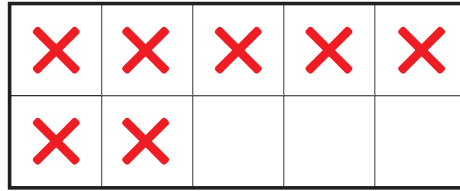



T Doubles



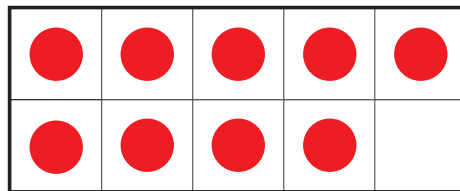
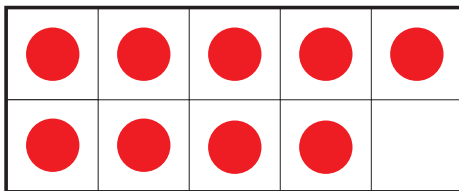
Find each sum. Write a number sentence.

A.



Number sentence _____

B.



Number sentence _____

U Schools of Fish



Nancy's class counted the number of fish they had at home as pets. One student had two fish. Another had eight fish. A third had six fish. How many fish did they have in all? Show how to solve the problem on the number line.

