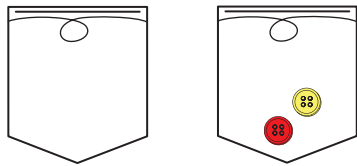


Teacher Guide

Home Practice

Part 1. Stories (TG p. 1)  
Questions A–D

- A. 2
- B. 8
- C. 2
- D. Answer will vary. Possible response:



$0 + 2 = 2$

Name \_\_\_\_\_ Date \_\_\_\_\_

Unit 1: Home Practice

Part 1 Stories  
Solve the problems.

- A.  $0 + \square = 2$
- B.  $7 + 1 = \square$
- C.  $\square + 4 = 6$
- D. Draw a picture or write a story for Question A.

Copyright © Kendall Hunt Publishing Company

TG • Grade 2 • Unit 1 • Home Practice

Teacher Guide - Page 1

Part 2. Petal Problems (TG p. 2)  
Questions 1–2

- 1.  $8 + 5 = 13$   
 $8 + 9 = 17$   
 $8 + 6 = 14$   
 $8 + 4 = 12$   
 $8 + 10 = 18$
- 2.  $7 + 5 = 12$   
 $7 + 9 = 16$   
 $7 + 6 = 13$   
 $7 + 4 = 11$   
 $7 + 10 = 17$

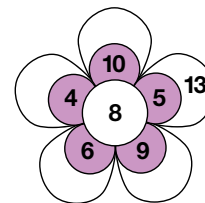
Copyright © Kendall Hunt Publishing Company

Name \_\_\_\_\_ Date \_\_\_\_\_

Part 2 Petal Problems

Add the number in the middle to each of the numbers in the colored petals. Write your answers on the white petals. One is done for you.

1.  $8 + 5 = 13$



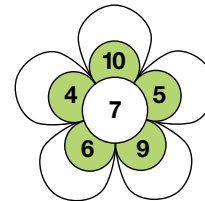
\_\_\_\_\_

\_\_\_\_\_

\_\_\_\_\_

\_\_\_\_\_

2. \_\_\_\_\_



\_\_\_\_\_

\_\_\_\_\_

\_\_\_\_\_

\_\_\_\_\_


Copyright © Kendall Hunt Publishing Company


TG • Grade 2 • Unit 1 • Home Practice 2


Teacher Guide - Page 2


Name \_\_\_\_\_ Date \_\_\_\_\_


**Part 3 How Much Money**  
Write the total amount of money on the blank. Use coins to help you.


1.  \_\_\_\_\_

2.  \_\_\_\_\_

3.  \_\_\_\_\_

4.  \_\_\_\_\_

5.  \_\_\_\_\_

6.  \_\_\_\_\_

Copyright © Kendall Hunt Publishing Company

**3 TG • Grade 2 • Unit 1 • Home Practice**

**Part 3. How Much Money (TG p. 3)  
Questions 1–6**

1. 8¢
2. 18¢
3. 12¢
4. 16¢
5. 19¢
6. 7¢

**Teacher Guide - Page 3**

Name \_\_\_\_\_ Date \_\_\_\_\_

**Part 4 Word Problems**  
Solve the problems.

1. Five kittens are playing with a ball of string. Three more kittens are eating. How many kittens are there in all?

Number sentence \_\_\_\_\_

2. Three whales are swimming close to shore. Nine more swim in from the deep water. How many whales are now in the group?

Number sentence \_\_\_\_\_

3. A pig has 9 piglets in her litter. She has already fed five of them. The rest are still hungry. How many piglets are hungry?

Number sentence \_\_\_\_\_

4. A pack of 13 wolves has 5 adults. The rest are pups. How many pups live in the pack?

Number sentence \_\_\_\_\_

5. Show or tell your strategy for solving Question 3.

Copyright © Kendall Hunt Publishing Company

**TG • Grade 2 • Unit 1 • Home Practice 4**


**Part 4. Word Problems (TG p. 4)  
Questions 1–5**

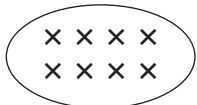
1. 8 kittens;  $5 + 3 = 8$
2. 12 whales;  $3 + 9 = 12$
3. 4 piglets;  $9 - 5 = 4$
4. 8 pups;  $13 - 5 = 8$
5. A possible response: I know that  $10 - 5 = 5$ , so  $9 - 5$  is one less, or 4.

**Teacher Guide - Page 4**

**Part 5. More Word Problems (TG p. 5)**  
**Questions 1–5**

1. 4 elephants;  $7 - 3 = 4$
2. 7 monkeys;  $11 - 4 = 7$
3. 8 frogs;  $12 - 4 = 8$
4. 5 more robins;  $9 - 4 = 5$
5. A possible response:


still sitting by pond


jumped in

Name \_\_\_\_\_ Date \_\_\_\_\_

**Part 5 More Word Problems**

**Solve the problems.**

1. There is a herd of elephants. Three baby elephants are born. Now there are seven elephants. How many elephants were in the herd to start?  
 Number sentence \_\_\_\_\_
2. There are 11 chattering monkeys. Four fall asleep. How many monkeys are still awake?  
 Number sentence \_\_\_\_\_
3. Twelve frogs are sitting near a pond. Some jump in. Four frogs are left sitting by the pond. How many frogs jumped in the pond?  
 Number sentence \_\_\_\_\_
4. Nine robins and 4 finches are at the bird feeder. How many more robins than finches are at the bird feeder?  
 Number sentence \_\_\_\_\_
5. Show or tell your strategy for solving Question 3.

Copyright © Kendall Hunt Publishing Company

5 TG • Grade 2 • Unit 1 • Home Practice

**Teacher Guide - Page 5**