

See Ten and Add



Dear Family Member:

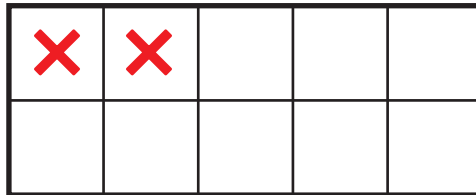

Students are continuing to practice the make-ten strategy to solve addition problems. Help your child find the numbers that make ten as they solve each problem.

Thank you.

Draw a circle around the numbers that make ten in the first problem in each pair. Then complete both problems in each pair. Show what you did on the ten frames.

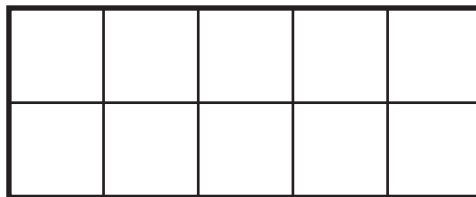

Ex. $(7 + 3) + 2 = 12$

$10 + 2 = 12$



A. $3 + 4 + 6 = \square$

$10 + \square = 13$



B. $5 + 1 + 9 = \square$

$10 + 5 = \square$

