



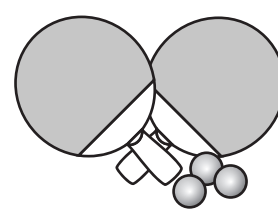

# Solve Subtraction Problems



Dear Family Member:

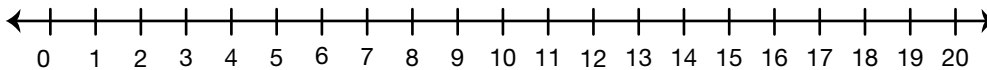
Students have been working on using strategies to solve subtraction problems. Your child may use counters, ten frames, number lines, or pictures to solve these problems. For each problem, your child should write a number sentence and show or tell how he or she solved the problem.

Thank you.

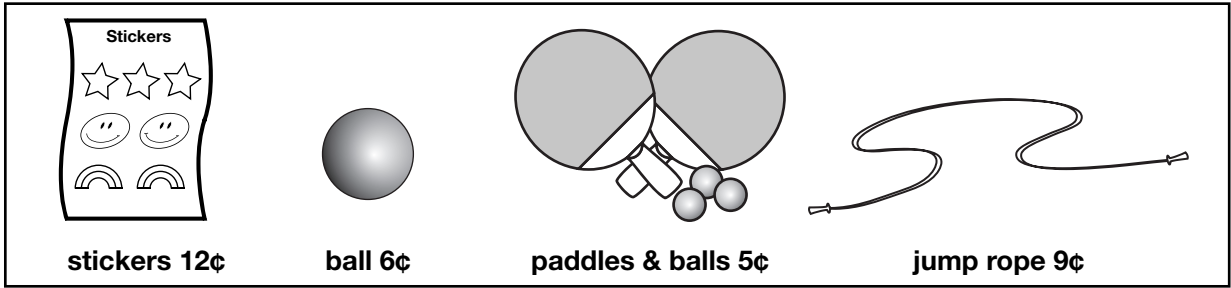
			
stickers 12¢	ball 6¢	paddles & balls 5¢	jump rope 9¢

1. You have 13¢. You buy a set of paddles and balls. How much money do you have left?

Number sentence \_\_\_\_\_



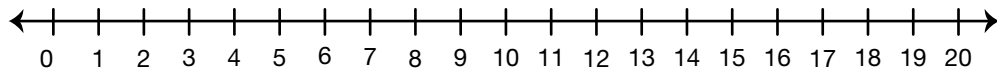




2. Natasha has 15¢. She buys something to play with and now she has 6¢ left.

What did she buy? \_\_\_\_\_

Number sentence \_\_\_\_\_





3. How much more do the stickers cost than the ball?

Number sentence \_\_\_\_\_

