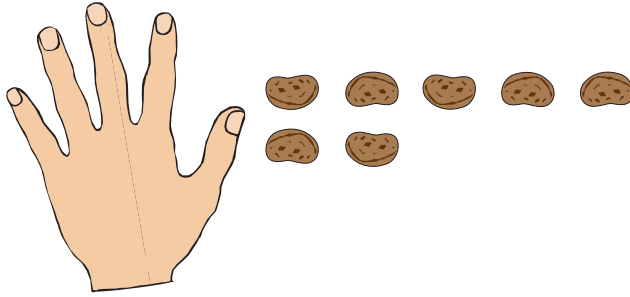


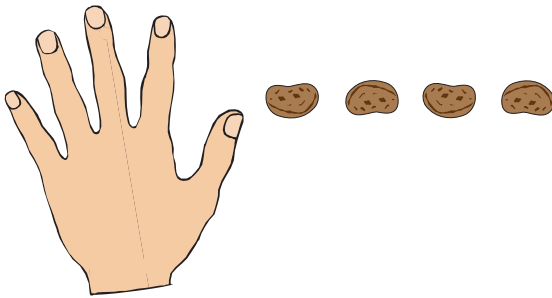
Bean Cover Up

Solve the problem. Write a subtraction and an addition number sentence for each problem.

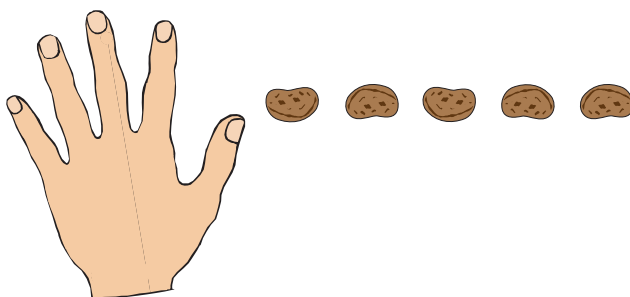
1. Julia has 12 beans. How many did she cover up? _____



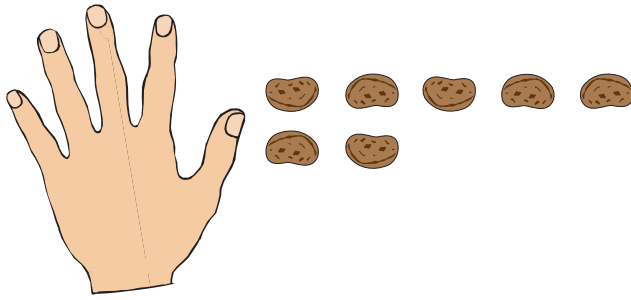
2. Jason has 10 beans. How many did he cover up? _____




3. Luis has 14 beans. How many did he cover up? _____




4. Fern has 15 beans. How many did she cover up? _____



5. Carla has 11 beans. How many did she cover up? _____



6. Mark has 13 beans. How many did he cover up? _____



7. Show or tell how you solved Question 6. You can use the number line.



8. Write the other two number sentences to complete the fact family for Question 6.

9. Draw a picture or write a story to match the number sentence $13 - 6 =$. Write the other number sentences to complete the fact family.

$13 - 6 =$ _____
