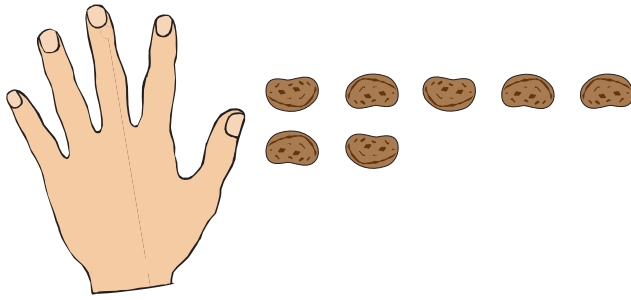



4. Fern has 15 beans. How many did she cover up? \_\_\_\_\_




\_\_\_\_\_

5. Carla has 11 beans. How many did she cover up? \_\_\_\_\_



\_\_\_\_\_

6. Mark has 13 beans. How many did he cover up? \_\_\_\_\_



\_\_\_\_\_