

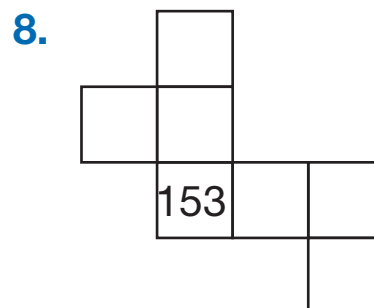
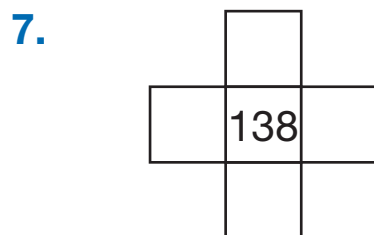
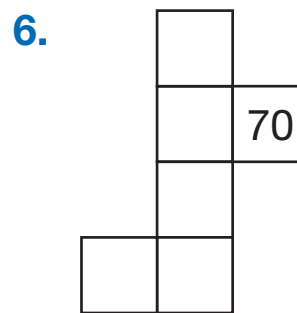

Tricky Patterns


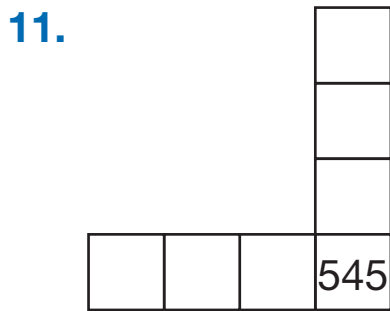
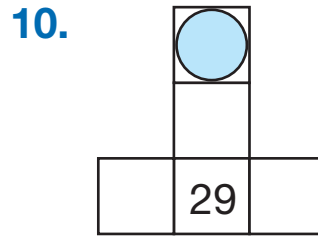
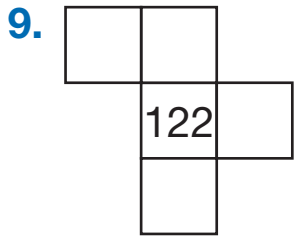
Use the clues and the 200 Chart to name the mystery number.
Write a number sentence.

What number is:

1. 5 more than 65 $65 + 5 =$ _____
2. 20 less than 176 _____
3. 30 more than 99 _____
4. Show or tell how you solved Question 3.

Fill in the boxes with the numbers from the 200 Chart.





13. Show or tell how you decided what number to write in the circle in Question 10.
