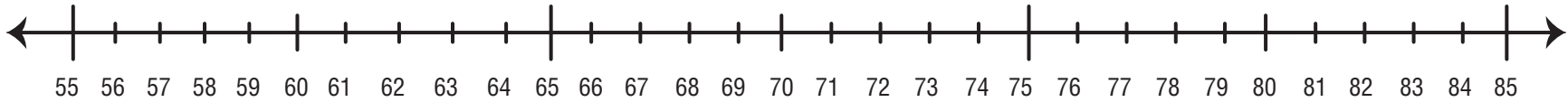


Name _____ Date _____

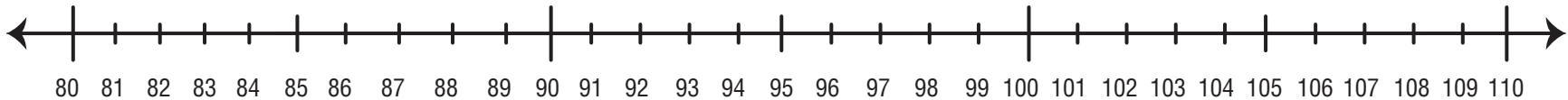
Number Line Moves

Draw the hops to show skip counting on the number line.

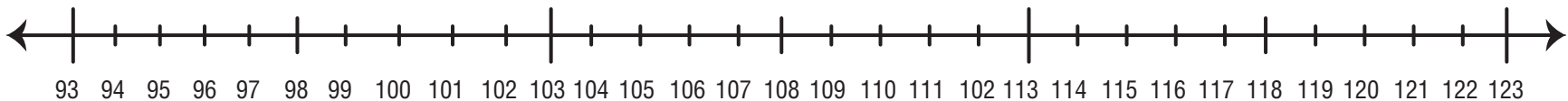
1. Start at 58 and skip count by ten.



2. Start at 83 and skip count by ten.



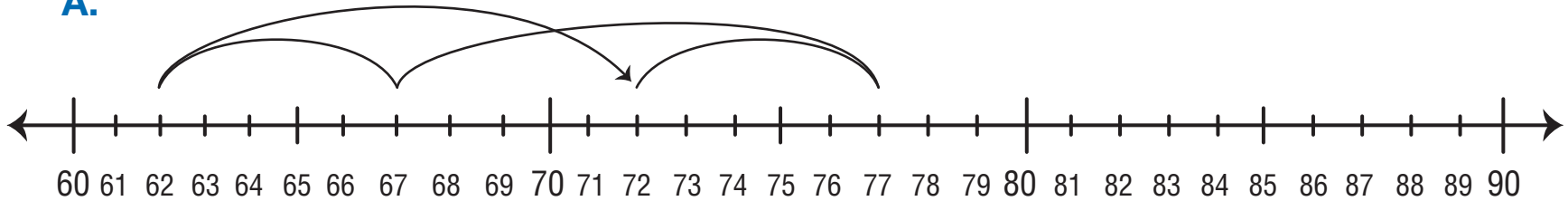
3. Start at 95 and skip count by two.



Name _____ Date _____

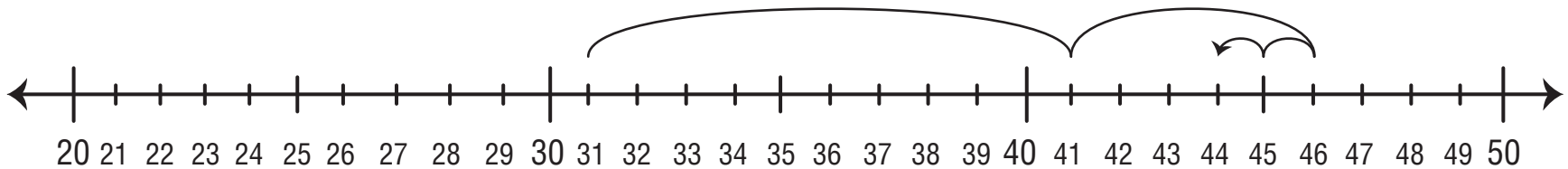
4. Frank forgot to record his moves when he played the *Moving on the Number Line* game. Finish labeling his recording sheets.

A.



Where did you land? Start 72 $+5$ -10 -5 $+10$ =

B.



Where did you land? Start 31 41 46 45 =