

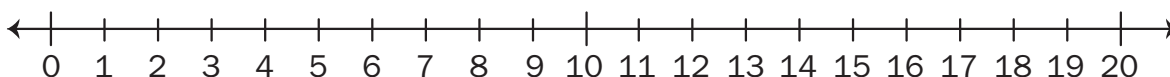
Name _____ Date _____

CC The Number Line

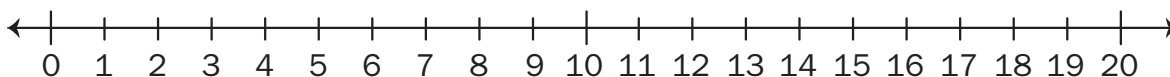


Use the number line to show how you solve the following problems.

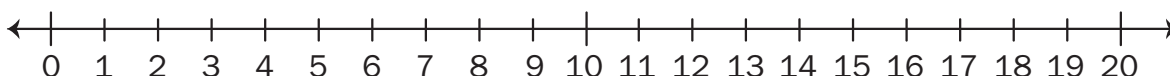
A. $15 - 8 = \square$



B. $10 + \square = 19$



C. $\square + 8 = 16$



D. $13 - \square = 6$

