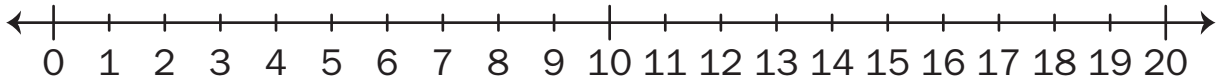
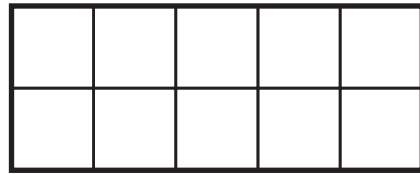
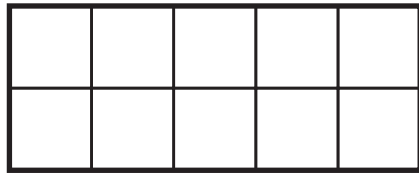


E Lots of Animals

Use connecting cubes, ten frames, and number lines to show how to solve each problem.

1. One flock of sheep has six lambs. The second flock has twice as many as the first. How many lambs does the second flock have?



2. Seven geese were flying overhead. Six more geese joined them. How many geese are flying together now?

