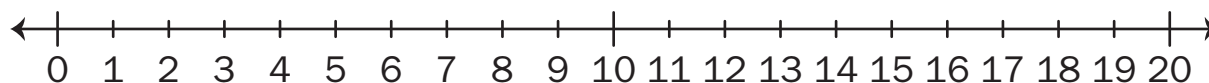
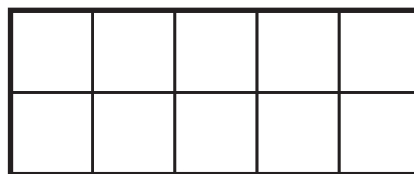
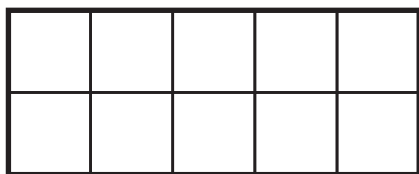


0 The School Store



Show or tell how to solve each problem.

1. An eraser costs 8¢. How much does it cost to buy two erasers?
Is your answer even or odd?



2. A sticker costs 4¢. Mario has 7¢. Does he have enough money to buy two stickers?

