

# Measure Lines

Measure each line in centimeters and inches. Measure to the nearest whole unit. Remember to label the units.

A. 

Length \_\_\_\_\_

Length \_\_\_\_\_

B. 

Length \_\_\_\_\_

Length \_\_\_\_\_

C. 


Length \_\_\_\_\_

Length \_\_\_\_\_

D. 

Length \_\_\_\_\_

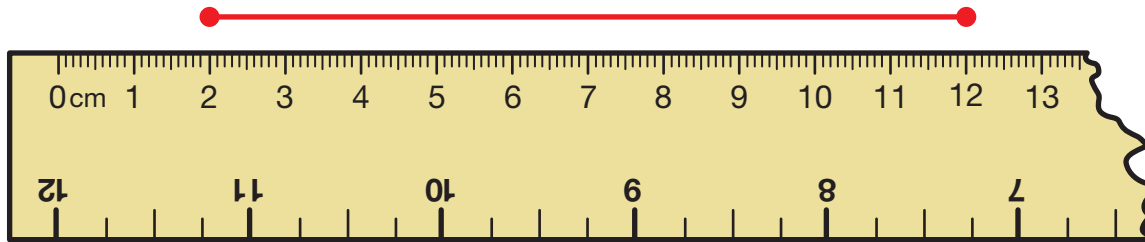
Length \_\_\_\_\_



**E.** Luis measured Line F.



12 centimeters

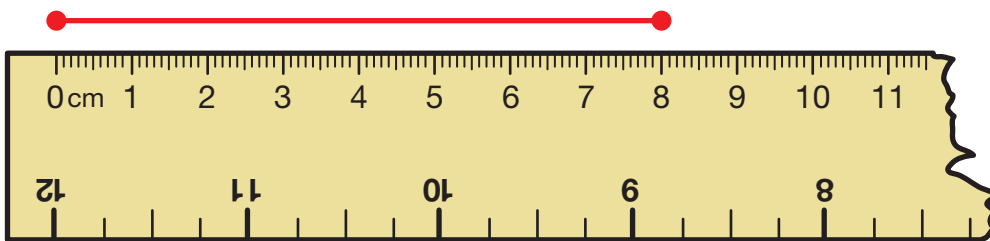


Do you agree with Luis? Why or why not?

---

---

**F.** Emily measured Line B.



Length 8 cm                      Length 9 in.

Do you agree with Emily? Why or why not?

---

---