

Name _____ Date _____

Snakes

Kim learned about small snakes at the zoo. Help her draw the lengths so she can compare them. Remember to label the units.

1. Draw the length of each snake. Start at the point.

red snake	2 in.	●
blue snake	6 cm	●
orange snake	4 in.	●
green snake	4 cm	●

2. Which is longer, the green snake or the orange snake? _____

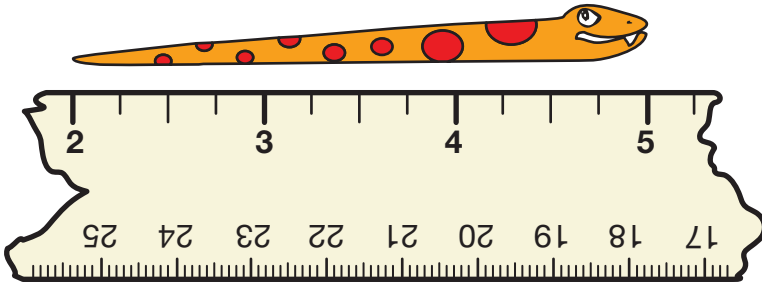
How could you tell without looking at the lines? _____

3. How much longer is the orange snake than the red snake? _____

Name _____ Date _____

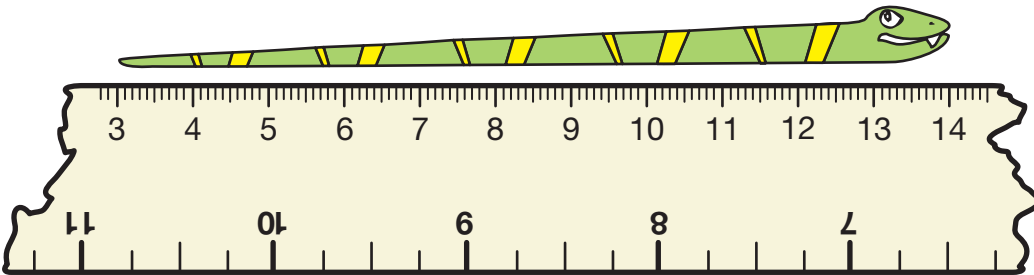
4. Kim and Sam broke their rulers. Help them measure these snakes with the broken rulers. Remember to label the units.

A.



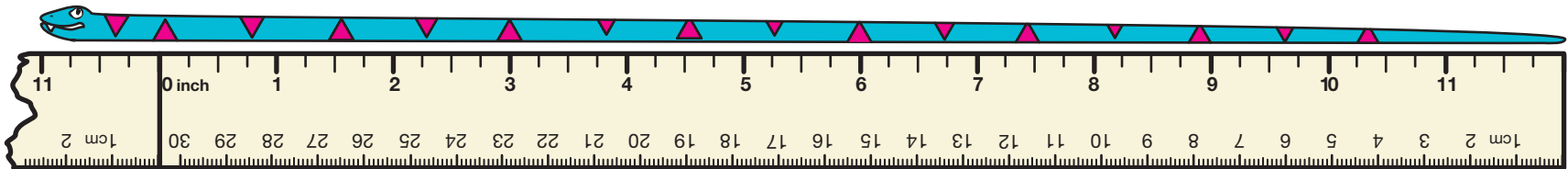
Length _____

B.



Length _____

C.



Length _____