





Part 3 Measurement Problems

Fern tested all of her wind-up toys to see how far they could walk before stopping. She wrote down the distances.

1. Help Fern draw lines so she can sort the lengths by size. Start at the point. You will need a 12-inch ruler and a centimeter ruler.

<p>soldier</p> 	<p>9 centimeters</p> <p>•</p>
<p>robot</p> 	<p>12 centimeters</p> <p>•</p>
<p>horse</p> 	<p>4 inches</p> <p>•</p>
<p>doll</p> 	<p>3 inches</p> <p>•</p>

2. Put the measurements in order from smallest to largest. Remember to include labels.

