

Teacher Guide

Measure With a Ruler (TG pp. 1–2)


Homework

Questions 1–3

1. Objects and measurements will vary.
2. A. Answers will vary
B. Answers will vary
C. Answers will vary
3. A. 17 cm, 7 inches
B. 30 cm, 12 inches

Name _____ Date _____

Measure with a Ruler



Dear Family Member:

We have been measuring with inches and centimeters. Help your child find an object that is about 1 inch long and an object that is about 1 centimeter long. If possible, have your child bring these objects to school to add to a class display. Then help him or her find two other objects to measure.

Thank you.

1. Find and measure the length of four objects in inches and centimeters. Measure to the nearest whole unit.

Object	Inches	Centimeters

2. A. What is the length of the longest object?

B. What is the length of the shortest object? _____

C. What is the difference in length between the two? _____

Number sentence _____


Copyright © Kendall Hunt Publishing Company

Homework Master TG • Grade 2 • Unit 4 • Lesson 2 |

Teacher Guide - Page 1


Name _____ Date _____

3. Measure each distance in centimeters and inches.

A. 

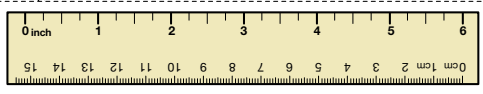
Length in centimeters _____

Length in inches _____

B. 

Length in centimeters _____

Length in inches _____



Copyright © Kendall Hunt Publishing Company

2 TG • Grade 2 • Unit 4 • Lesson 2 Homework Master

Teacher Guide - Page 2