


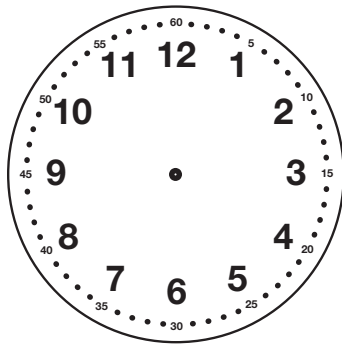
# Levi's Busy Day

Read about Levi's day. Circle AM or PM.  
 Show the time on your individual clock. Draw the hands on the clocks below.

Draw the hour (short) hand first.  
 Is 8:45 closer to 8 o'clock or 9 o'clock?



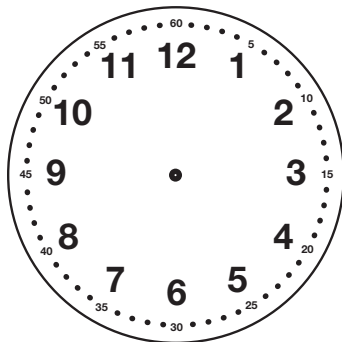
A. Levi wakes up at 6:30.



AM

PM

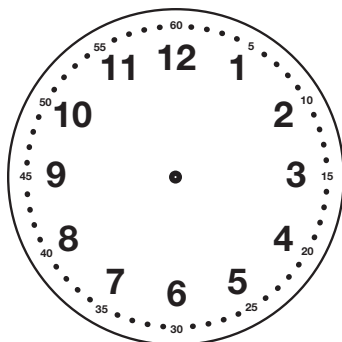
B. He eats breakfast at 7:00.



AM

PM

C. He gets dressed at 8:15.



AM

PM