

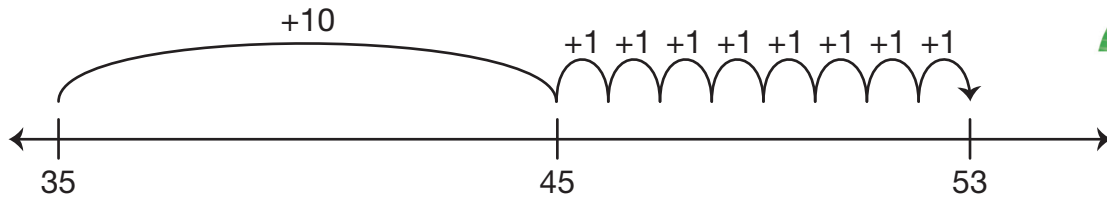


Check-In: Questions I-K

- I. Richard started at 35 and moved forward 18.




Richard

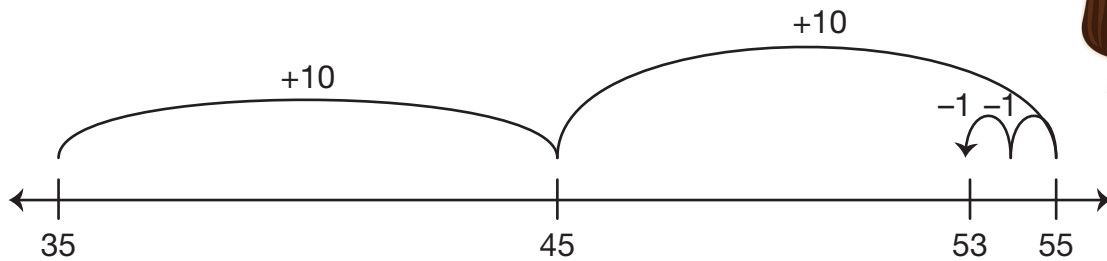


$$35 + 10 + 1 + 1 + 1 + 1 + 1 + 1 + 1 + 1$$

Mara solved the problem this way:



Mara



$$35 + 10 + 10 - 1 - 1$$

Is this a true number sentence:

$$35 + 10 + 1 + 1 + 1 + 1 + 1 + 1 + 1 + 1 = 35 + 10 + 10 - 1 - 1?$$

How do you know?

Name _____ Date _____

J. Start at 40 and move forward 19. Show it two ways.




Number sentence _____



Number sentence _____

K. Start at 53 and move backward 19.



Number sentence _____

Copyright © Kendall Hunt Publishing Company