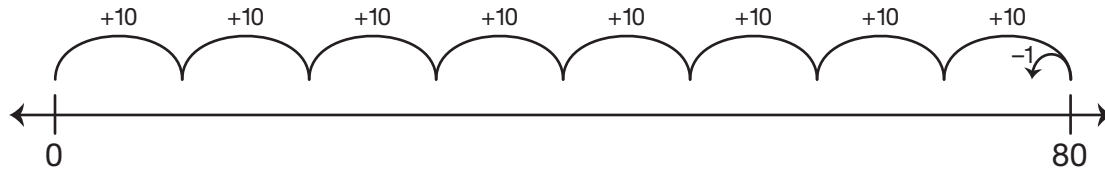

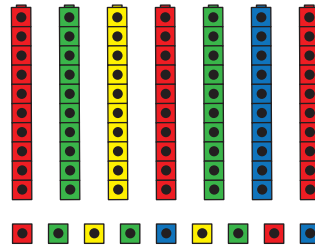


2. Circle all the ways to show 79.



| Tens | Ones |
|------|------|
| 7 | 9 |
| 6 | 19 |



$$10 + 10 + 10 + 10 + 10 + 10 + 10 + 10 + 9 = 79$$

$$9 + 70 = 79$$

$$7 + 90 = 79$$

$$70 + 5 + 1 + 1 + 1 + 1 = 79$$

