



5. Show the base-ten hopper's moves on the number lines to solve the problems.


A. Start at 20 and move 28.



B. Start at 54 and move 17.



C. Start at 159 and move 49.



6. Write the symbols $>$, $<$, or $=$ to make each sentence true.

A. 43 34

B. $70 + 15$ 85

C. 365 563

D. 505 5 hundreds and 5 tens

E. 724 427

F. one hundred and three tens 13 tens