

**Part 3 Math Facts Practice**

A.  $15 = \square + 5$

B.  $9 + \square = 16$

C.  $9 + 9 = \square$

D.  $\square + 8 = 18$

E.  $6 + \square = 14$

F.  $10 + \square = 16$

G.  $\square + 9 = 17$

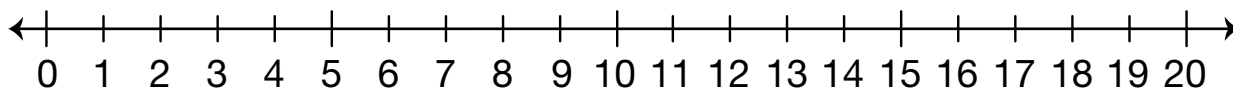
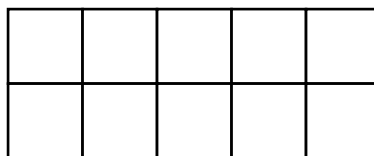
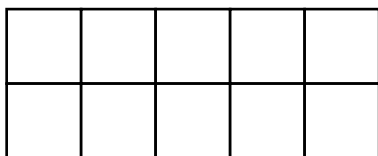
H.  $10 + 4 = \square$

I.  $\square + 7 = 17$

J.  $9 + \square = 15$

K. Show your strategy for solving Question J.

L. Show how to solve it another way.



**Part 4 True or False**

**A.**  $5 + 1 + 3 = 4 + 6$  \_\_\_\_\_

**B.**  $3 + 6 = 3 + 3 + 3$  \_\_\_\_\_

**C.**  $7 + 4 = 10$  \_\_\_\_\_

**D.**  $3 + 4 + 2 = 7 + 3$  \_\_\_\_\_

**E.**  $8 + 4 = 10 + 2$  \_\_\_\_\_

**F.**  $8 + 1 = 11$  \_\_\_\_\_

**G.** Show or tell how you solved Question E.