



Student Activity Book

Levi's Busy Day (SAB pp. 223–226)
Questions A–L

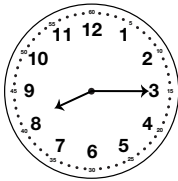
A. AM



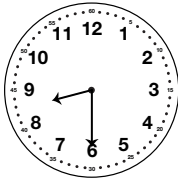
B. AM



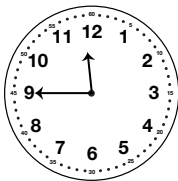
C. AM



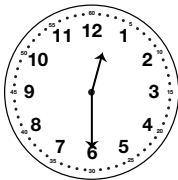
D. AM



E.* AM



F. PM



Copyright © Kendall Hunt Publishing Company

*Answers and/or discussion are included in the lesson.

Name _____ Date _____

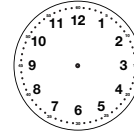
Levi's Busy Day

Read about Levi's day. Circle AM or PM.
Show the time on your individual clock. Draw the hands on the clocks below.

Draw the hour (short) hand first. Is 8:45 closer to 8 o'clock or 9 o'clock?

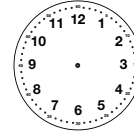


A. Levi wakes up at 6:30.



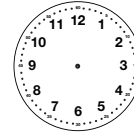
AM PM

B. He eats breakfast at 7:00.



AM PM

C. He gets dressed at 8:15.



AM PM

Copyright © Kendall Hunt Publishing Company

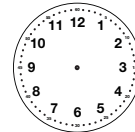
Take Your Time

SAB • Grade 2 • Unit 5 • Lesson 1 223

Student Activity Book - Page 223

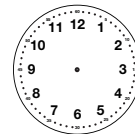
Name _____ Date _____

D. Levi takes the dog for her morning walk at 8:30.



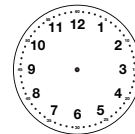
AM PM

E. He walks to his grandma's house for lunch at 11:45.



AM PM

F. Levi eats lunch with his grandma at 12:30.



AM PM

Copyright © Kendall Hunt Publishing Company


224 SAB • Grade 2 • Unit 5 • Lesson 1

Take Your Time

Student Activity Book - Page 224

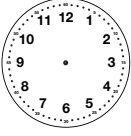
Name _____ Date _____

G. He helps his grandma make dinner at 5:15.



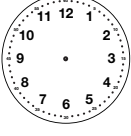
AM PM

H. They play a game after dinner at 6:45.



AM PM

I. Levi eats ice cream for dessert at 7:15.



AM PM

Copyright © Kendall Hunt Publishing Company


Take Your Time SAB • Grade 2 • Unit 5 • Lesson 1 **225**

Student Activity Book - Page 225

Name _____ Date _____


✓ Check-In: Questions J-L

J. Levi gets his pajamas on at 7:30.



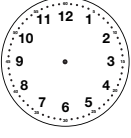
AM PM

K. He reads a book before bed at 8:00.



AM PM

L. Levi goes to sleep at 8:30.



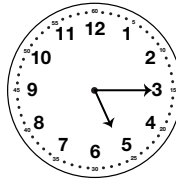
AM PM

Copyright © Kendall Hunt Publishing Company

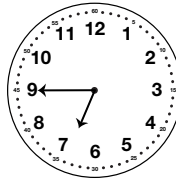
226 SAB • Grade 2 • Unit 5 • Lesson 1 Take Your Time

Student Activity Book - Page 226

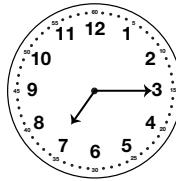
G. PM



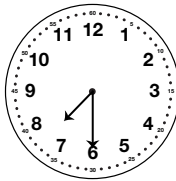
H. PM



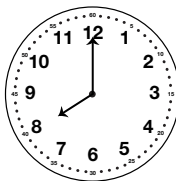
I. PM



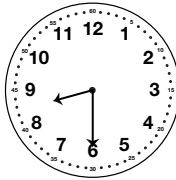
J. PM



K. PM



L. PM




Teacher Guide

**Telling Time (TG pp. 1–2)
Homework
Questions 1–2**


1. A. 2:30 B. 10:30
 C. 9:30 D. 7:00
 E. 5:30 F. 6:00
2. A. 10:15 B. 7:45
 C. 12:00 D. 2:15
 E. 1:30 F. 6:15


Name _____ Date _____


Telling Time





1. Tell and write the time.


A. 

B. 

C. 

D. 

E. 

F. 

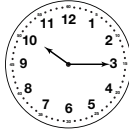
Copyright © Kendall Hunt Publishing Company

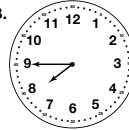
Homework Master TG • Grade 2 • Unit 5 • Lesson 1 |


Teacher Guide - Page 1

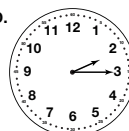
Name _____ Date _____

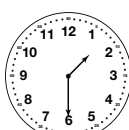
2. Write the correct time under each clock.

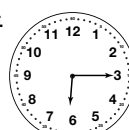
A. 

B. 

C. 

D. 

E. 

F. 

12:00

6:15

1:30

7:45

10:15

2:15

Copyright © Kendall Hunt Publishing Company

2 TG • Grade 2 • Unit 5 • Lesson 1 Homework Master

Teacher Guide - Page 2