

Matching Cubes and Numbers



Dear Family Member:

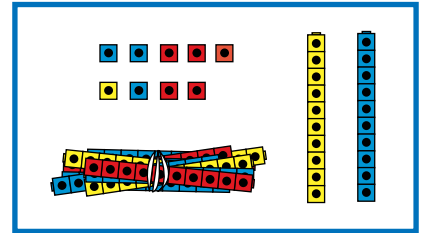
Your child is learning about place value in class and using cubes to represent numbers. Help your child match the numbers and the pictures below.

Thank you.

Draw a line to match the models and the numbers.

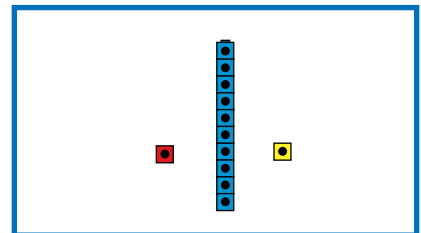
1.

Bundles of 100	Stacks of 10	Leftovers
	1	2



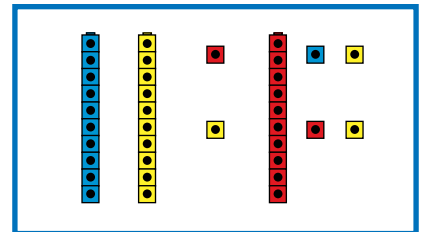
2.

Bundles of 100	Stacks of 10	Leftovers
	3	6



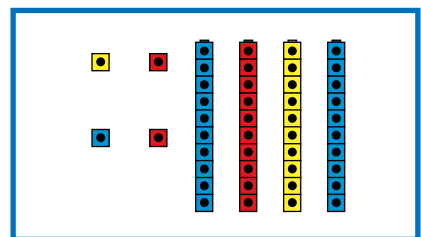
3.

Bundles of 100	Stacks of 10	Leftovers
	4	4



4.

Bundles of 100	Stacks of 10	Leftovers
1	2	9



Draw pictures to represent the numbers and write a number sentence. The first number sentence is done for you.

5.

Bundles of 100	Stacks of 10	Leftovers
	1	5



Number sentence 10 + 5 = 15

6.

Bundles of 100	Stacks of 10	Leftovers
1	2	3

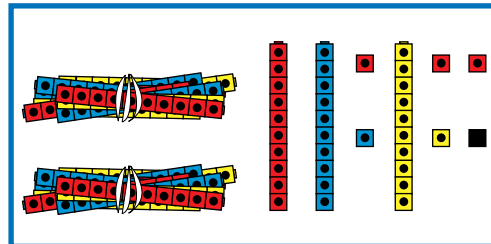


Number sentence _____

Fill in the tables. Write a number sentence to match.

7.

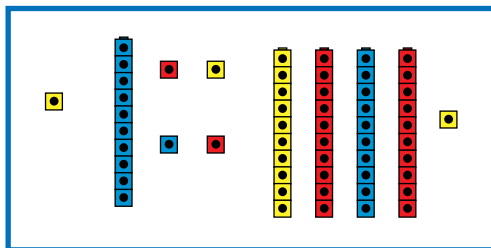
Bundles of 100	Stacks of 10	Leftovers



Number sentence _____

8.

Bundles of 100	Stacks of 10	Leftovers



Number sentence _____