

Matching Cubes and Numbers



Dear Family Member:

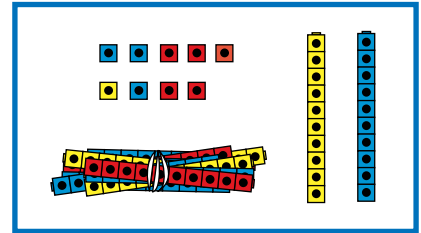
Your child is learning about place value in class and using cubes to represent numbers. Help your child match the numbers and the pictures below.

Thank you.

Draw a line to match the models and the numbers.

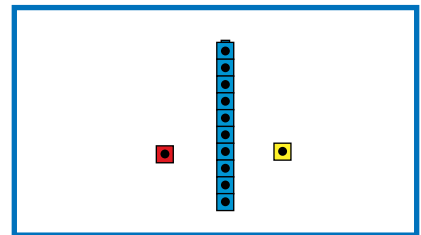
1.

Bundles of 100	Stacks of 10	Leftovers
	1	2



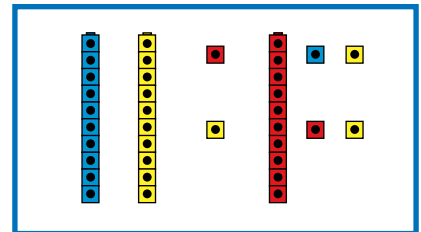
2.

Bundles of 100	Stacks of 10	Leftovers
	3	6



3.

Bundles of 100	Stacks of 10	Leftovers
	4	4



4.

Bundles of 100	Stacks of 10	Leftovers
1	2	9

