



3. Start at 20 and move forward 1 ten.




Number sentence _____

4. Start at 10 and move forward 33.




Number sentence _____

5. Start at 40 and move backward 2 tens.



Number sentence _____

6. Start at 40 and move backward 23.



Number sentence _____