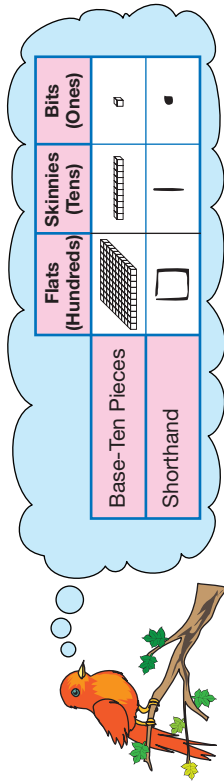


Name _____ Date _____

Show a Number

Complete the chart.



Number	Base-Ten Pieces	Number Sentence
127	<p>_____ flats _____ skinnies _____ bits</p> <p>_____ flats _____ skinnies _____ bits</p>	<p>_____ + _____ + _____ = _____</p>
	<p>_____ flats _____ skinnies _____ bits</p> <p>_____ flats _____ skinnies _____ bits</p>	<p>_____ + _____ + _____ = _____</p> <p>200 + 30 + 1 = 231</p>

1.

2.

3.

4. Write the number sentence for each set of base-ten pieces or shorthand.

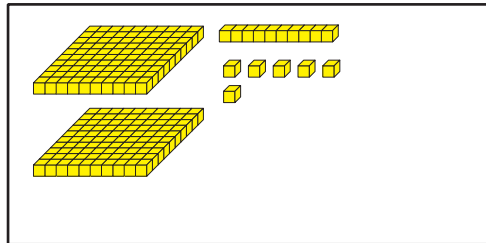
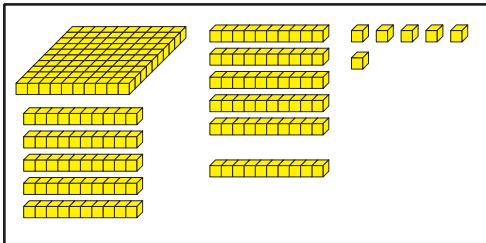
A.  _____

B.  _____

C.  _____

D. Show the number in Question 4B using the fewest pieces.

5. What number is shown in each picture? Write the number sentence below each set of pieces. Compare the two pictures. If they are the same, circle “yes.” If they are not the same, circle “no.”



Are they the same?

Yes

No