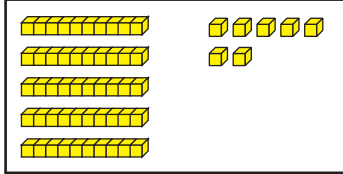
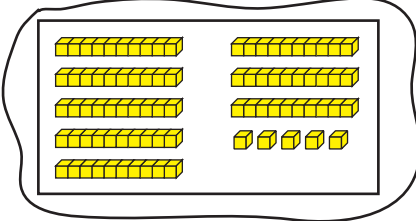


Compare Numbers

Circle the box that shows the greater number. Write a number sentence to compare the numbers. Use $<$, $>$, or $=$.

Example:



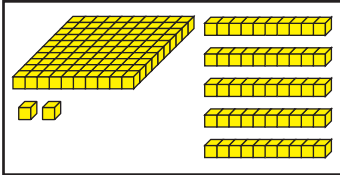
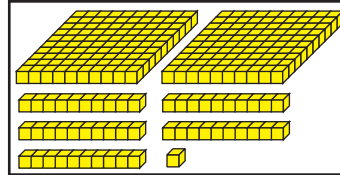


Number sentence _____ $57 < 85$ _____

$<$ less than
 $>$ greater than
 $=$ equal to

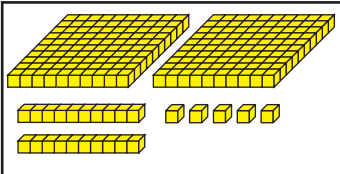
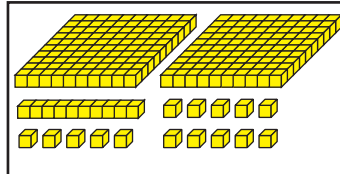


1.

Number sentence _____

2.

Number sentence _____