

# Walk the Number Line

**Place the numbers on the number line. Write the number that is largest or smallest on the line provided.**

- 1.** 185, 79, 42



Which number is largest? \_\_\_\_\_

- 2.** 83, 127, 101



Which number is largest? \_\_\_\_\_

- 3.** 64, 180, 23



Which number is smallest? \_\_\_\_\_

- 4.** 55, 125, 96



Which number is smallest? \_\_\_\_\_

 **Check-In: Question 5**

5. A. Place 49, 110, and 190 on the number line.



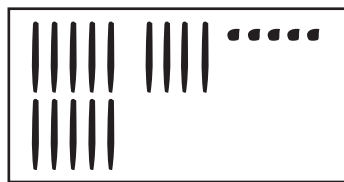
B. How did you decide where to place 190?

---



---


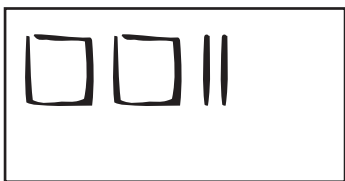
C. Compare each pair of numbers. Use  $<$ ,  $>$ , or  $=$ .




---

 ○ 

---




---

 ○ 

---

D. Write the four numbers in Question 5C in order from smallest to largest.