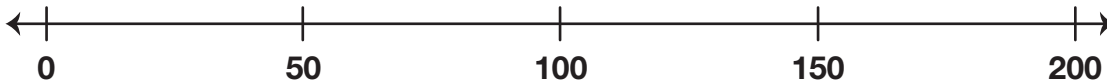


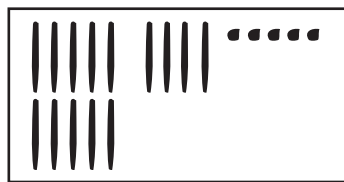
 **Check-In: Question 5**

5. A. Place 49, 110, and 190 on the number line.


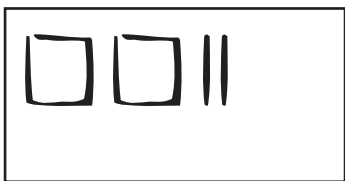


B. How did you decide where to place 190?

C. Compare each pair of numbers. Use $<$, $>$, or $=$.



 ○



 ○

D. Write the four numbers in Question 5C in order from smallest to largest.