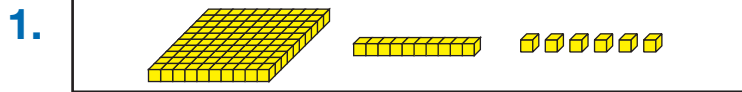


Hop Along

Model the number with base-ten pieces. Show two different ways to hop on the number line. Write a number sentence for each way.




A.

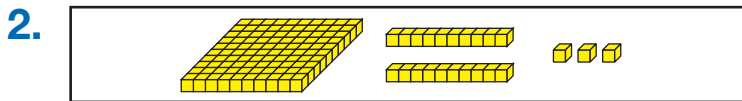


Number sentence _____


B.



Number sentence _____



A.

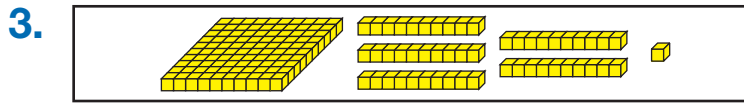


Number sentence _____


B.



Number sentence _____




A.

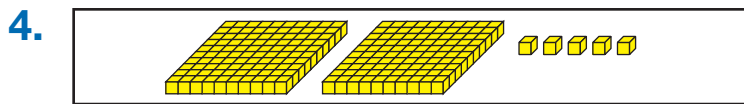


Number sentence _____

B.



Number sentence _____



A.



Number sentence _____

B.



Number sentence _____