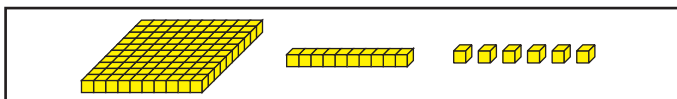



# Hop Along

Model the number with base-ten pieces. Show two different ways to hop on the number line. Write a number sentence for each way.

1.




A.



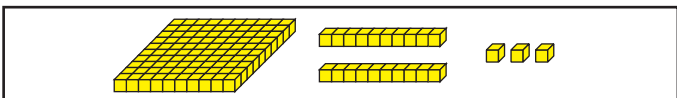
Number sentence \_\_\_\_\_

B.




Number sentence \_\_\_\_\_

2.




A.



Number sentence \_\_\_\_\_

B.



Number sentence \_\_\_\_\_