

Show two different ways to hop on the number line. Write a number sentence for each way.

8. Choose a number shown in Questions 1–7.


I choose _____

A.



Number sentence _____

B.




Number sentence _____

9. Choose a different number from Questions 1–7.


I choose _____

A.



Number sentence _____

B.



Number sentence _____