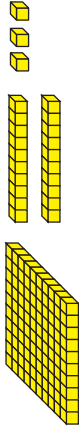
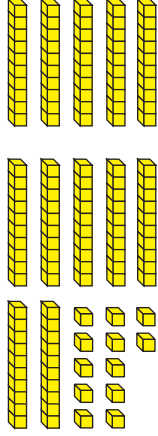


Name \_\_\_\_\_ Date \_\_\_\_\_

# Compare and Order

Use base-ten shorthand and a number sentence to show the number different ways.

Number	Fewest Pieces	Another Way
56	Number sentence _____ 	Number sentence _____ 
	Number sentence _____ 	Number sentence _____ 
	Number sentence _____ 	 Number sentence _____

1.

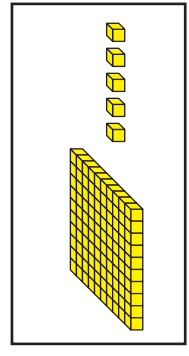
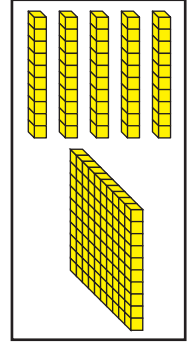
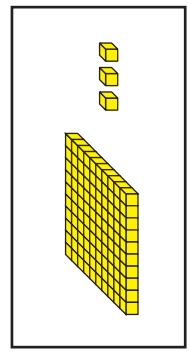
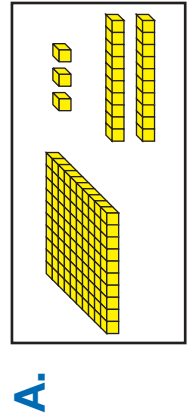
2.

3.

4. Put the numbers in Questions 1–3 on the number line.

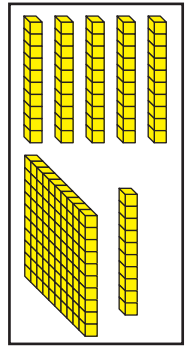

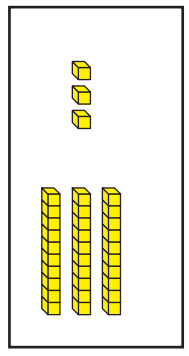
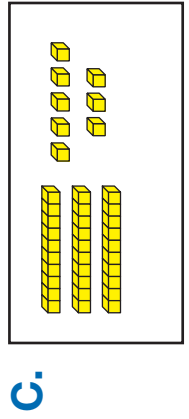


5. Circle the box that shows the larger number. Write a number sentence to compare the numbers. Use  $<$  or  $>$ .



Number sentence \_\_\_\_\_

Number sentence \_\_\_\_\_



Number sentence \_\_\_\_\_

Number sentence \_\_\_\_\_

**E.** List the numbers in Questions 5A–D in order from smallest to largest.

Smallest \_\_\_\_\_ Largest \_\_\_\_\_