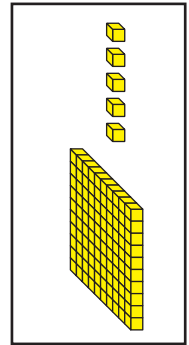
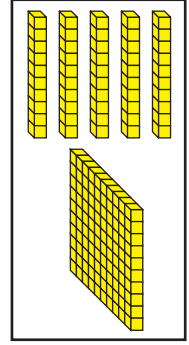
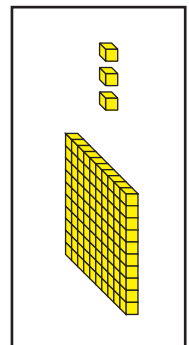
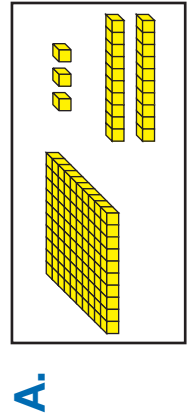
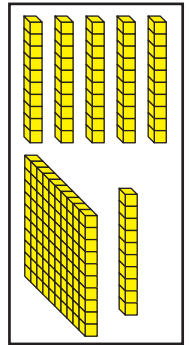

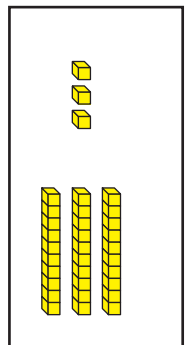
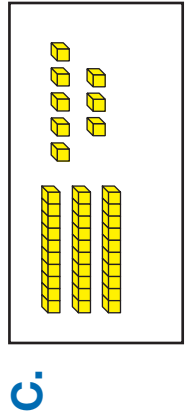


5. Circle the box that shows the larger number. Write a number sentence to compare the numbers. Use $<$ or $>$.



Number sentence _____

Number sentence _____



Number sentence _____

Number sentence _____

E. List the numbers in Questions 5A–D in order from smallest to largest.

Smallest _____ Largest _____