



**Student Activity Book**

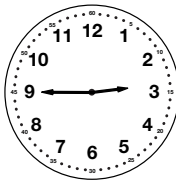

**Time to Five Minutes (SAB pp. 271–272)**

**Questions 1–12**



- |          |          |
|----------|----------|
| 1. 10:35 | 2. 5:05  |
| 3. 2:50  | 4. 8:10  |
| 5. 1:15  | 6. 11:40 |
| 7.       | 8.       |



- |    |     |
|----|-----|
| 9. | 10. |
|----|-----|









- |     |     |
|-----|-----|
| 11. | 12. |
|-----|-----|



Name \_\_\_\_\_ Date \_\_\_\_\_

**Time to Five Minutes**

Show the time on your clock. Write the time under the clocks.



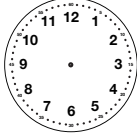

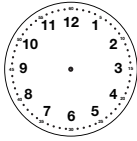

1. 	2. 
_____	_____
3. 	4. 
_____	_____
5. 	6. 
_____	_____

Time to the Nearest Five Minutes SAB • Grade 2 • Unit 6 • Lesson 1 271

**Student Activity Book - Page 271**

Name \_\_\_\_\_ Date \_\_\_\_\_

Show the time on your clock. Draw the hands on the clocks.


7. 	8. 
2:05	2:30
_____	_____
9. 	10. 
2:15	2:45
_____	_____
11. 	12. 
2:55	2:25
_____	_____

272 SAB • Grade 2 • Unit 6 • Lesson 1 Time to the Nearest Five Minutes

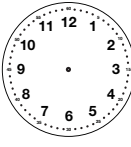

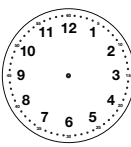


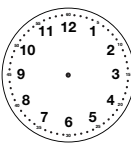
**Student Activity Book - Page 272**

Name \_\_\_\_\_ Date \_\_\_\_\_

**Time Around the Clock**



Write or draw the times on the clocks.

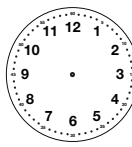





1.		2.	
	10:25		
3.		4.	
	7:45		
5.		6.	
			4:30

Copyright © Kendall Hunt Publishing Company

Homework Master TG • Grade 2 • Unit 6 • Lesson 1 |

**Teacher Guide - Page 1**

Name \_\_\_\_\_ Date \_\_\_\_\_

7.		8.	
	1:30		
9.		10.	
	4:50		
11.		12.	
	7:15		

Copyright © Kendall Hunt Publishing Company

2 TG • Grade 2 • Unit 6 • Lesson 1 Homework Master

**Teacher Guide - Page 2**


**Teacher Guide**

**Time Around the Clock (TG pp. 1–2)**

**Homework**


**Questions 1–12**

1.



2. 2:55

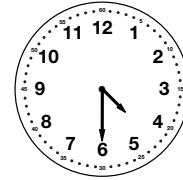
3.




4. 6:10

5. 1:10

6.




7.



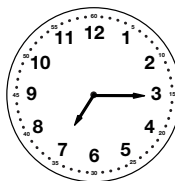
8. 5:20

9.



10. 9:10

11.



12. 12:40