



Student Activity Book

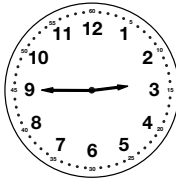

Time to Five Minutes (SAB pp. 271–272)

Questions 1–12



- 1. 10:35
- 2. 5:05
- 3. 2:50
- 4. 8:10
- 5. 1:15
- 6. 11:40
- 7.
- 8.



- 9.
- 10.



- 11.
- 12.





Copyright © Kendall Hunt Publishing Company


Name _____ Date _____


Time to Five Minutes


Show the time on your clock. Write the time under the clocks.


1.  _____

2.  _____

3.  _____

4.  _____

5.  _____

6.  _____


Copyright © Kendall Hunt Publishing Company


Time to the Nearest Five Minutes SAB • Grade 2 • Unit 6 • Lesson 1 **271**


Student Activity Book - Page 271


Name _____ Date _____

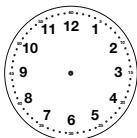
Show the time on your clock. Draw the hands on the clocks.

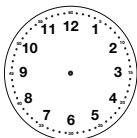
7.  _____
2:05

8.  _____
2:30

9.  _____
2:15

10.  _____
2:45

11.  _____
2:55

12.  _____
2:25

Copyright © Kendall Hunt Publishing Company

272 SAB • Grade 2 • Unit 6 • Lesson 1 Time to the Nearest Five Minutes

Student Activity Book - Page 272