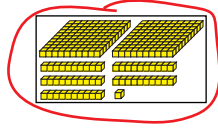
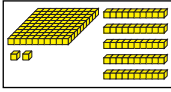


Student Activity Book

Compare Numbers (SAB pp. 293–294)

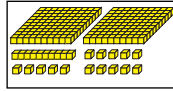
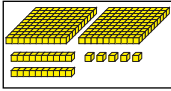
Questions 1–7

1.



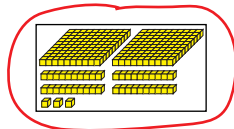
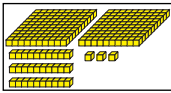
$152 < 251$

2.



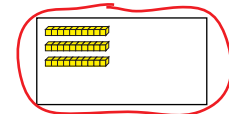
$225 = 225$

3.



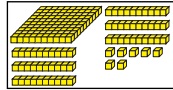
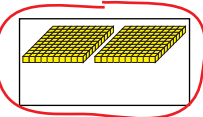
$233 < 243$

4.



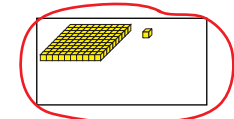
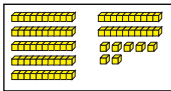
$28 < 30$

5.



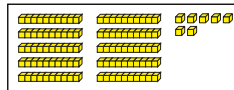
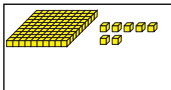
$200 > 167$

6.



$77 < 101$

7.



$107 = 107$

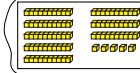
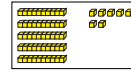
Copyright © Kendall Hunt Publishing Company

Name _____ Date _____

Compare Numbers

Circle the box that shows the greater number. Write a number sentence to compare the numbers. Use $<$, $>$, or $=$.

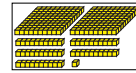
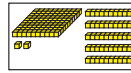
Example:



Number sentence $57 < 85$

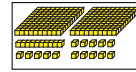
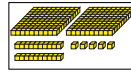


1.



Number sentence _____

2.



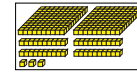
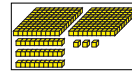
Number sentence _____

Copyright © Kendall Hunt Publishing Company

Student Activity Book - Page 293

Name _____ Date _____

3.



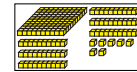
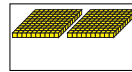
Number sentence _____

4.



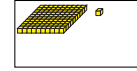
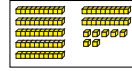
Number sentence _____

5.



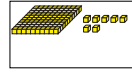
Number sentence _____

6.



Number sentence _____

7.



Number sentence _____

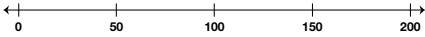
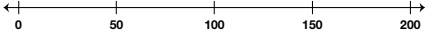


Copyright © Kendall Hunt Publishing Company

Student Activity Book - Page 294

Name _____ Date _____

Walk the Number Line

Place the numbers on the number line. Write the number that is largest or smallest on the line provided.

- 185, 79, 42

 Which number is largest? _____
- 83, 127, 101

 Which number is largest? _____
- 64, 180, 23

 Which number is smallest? _____
- 55, 125, 96

 Which number is smallest? _____

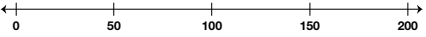
Copyright © Kendall Hunt Publishing Company

Comparing and Ordering SAB • Grade 2 • Unit 6 • Lesson 5 295

Student Activity Book - Page 295

Name _____ Date _____

✓ **Check-In: Question 5**

5. A. Place 49, 110, and 190 on the number line.

- B. How did you decide where to place 190?

- C. Compare each pair of numbers. Use $<$, $>$, or $=$.

□
○	
□□	□□..
○	
- D. Write the four numbers in Question 5C in order from smallest to largest.

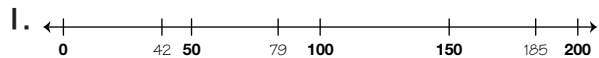
Copyright © Kendall Hunt Publishing Company

296 SAB • Grade 2 • Unit 6 • Lesson 5 Comparing and Ordering

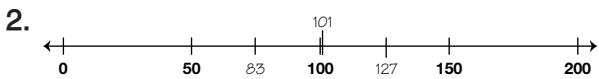
Student Activity Book - Page 296

Walk the Number Line (SAB pp. 295–296)

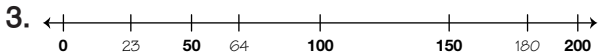
Questions 1–5



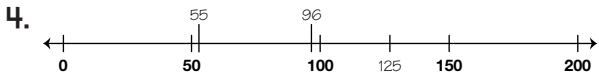
185 is largest



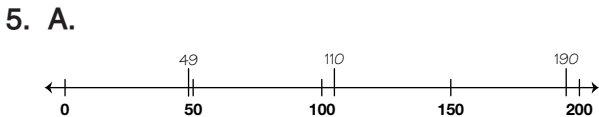
127 is largest



23 is smallest



55 is smallest



B. Possible response: 190 is ten less than 200 so I placed it close to 200.

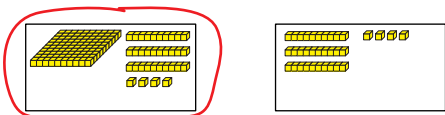
C. 133 $<$ 145

220 $>$ 202

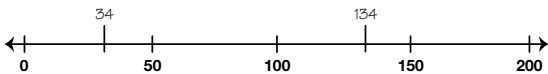
D. 133, 145, 202, 220

Teacher Guide

Compare Numbers at Home (TG pp. 1–3)
Homework
Questions 1–5

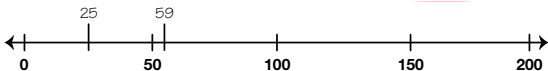
1. 

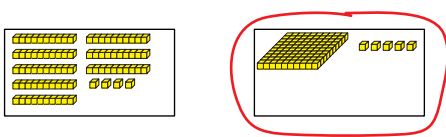
$134 > 34$



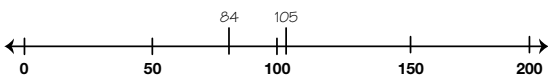
2. 

$25 < 59$



3. 

$84 < 105$



Copyright © Kendall Hunt Publishing Company

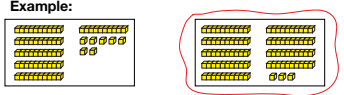
Name _____ Date _____

Compare Numbers at Home

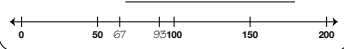


Circle the box that shows the greatest number. Write a number sentence to compare the numbers. Use $<$ or $>$. Then place the numbers on the number line.


Example:

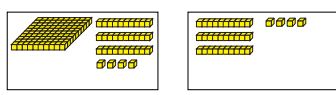


Number sentence $67 < 93$

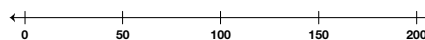


$<$ less than
 $>$ greater than
 $=$ equal to



1. 

Number sentence _____



Copyright © Kendall Hunt Publishing Company

TG • Grade 2 • Unit 6 • Lesson 5


Homework Master

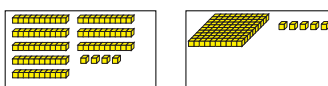
Teacher Guide - Page 1

Name _____ Date _____

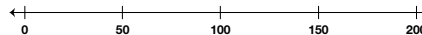
2. 

Number sentence _____



3. 

Number sentence _____



Copyright © Kendall Hunt Publishing Company

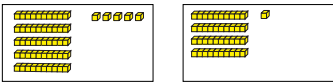
Homework Master

TG • Grade 2 • Unit 6 • Lesson 5 2

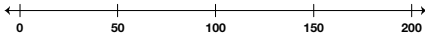
Teacher Guide - Page 2

Name _____ Date _____

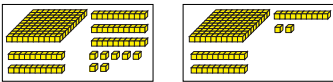
4.



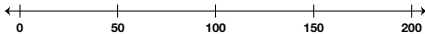
Number sentence _____



5.



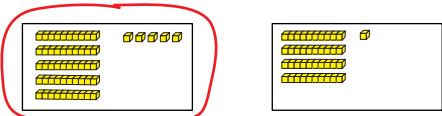
Number sentence _____



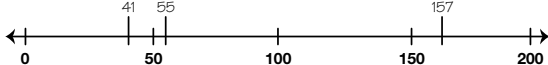
Copyright © Kendall Hunt Publishing Company

3 TG • Grade 2 • Unit 6 • Lesson 5 Homework Master


4.



$55 > 41$



5.



$157 > 132$

