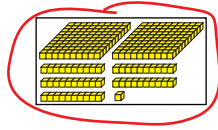
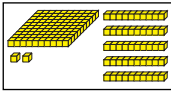


Student Activity Book

Compare Numbers (SAB pp. 293–294)

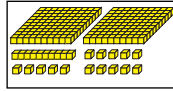
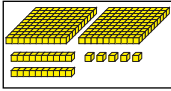
Questions 1–7

1.



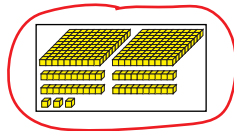
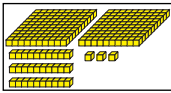
$152 < 251$

2.



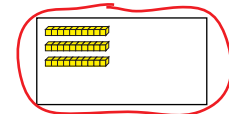
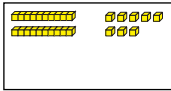
$225 = 225$

3.



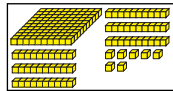
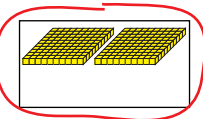
$233 < 243$

4.



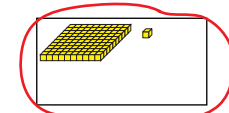
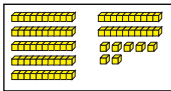
$28 < 30$

5.



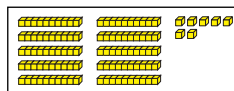
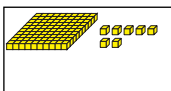
$200 > 167$

6.



$77 < 101$

7.



$107 = 107$

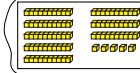
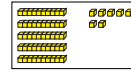
Copyright © Kendall Hunt Publishing Company

Name _____ Date _____


Compare Numbers

Circle the box that shows the greater number. Write a number sentence to compare the numbers. Use $<$, $>$, or $=$.

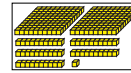
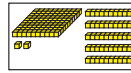
Example:



Number sentence $57 < 85$

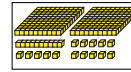
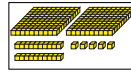


1.



Number sentence _____

2.



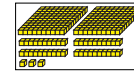
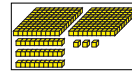
Number sentence _____

Copyright © Kendall Hunt Publishing Company

Student Activity Book - Page 293

Name _____ Date _____

3.



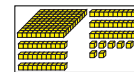

Number sentence _____

4.



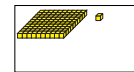
Number sentence _____

5.



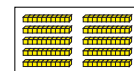
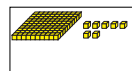
Number sentence _____

6.



Number sentence _____

7.



Number sentence _____

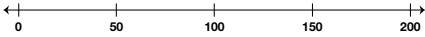
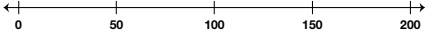


Copyright © Kendall Hunt Publishing Company

Student Activity Book - Page 294

Name _____ Date _____

Walk the Number Line

Place the numbers on the number line. Write the number that is largest or smallest on the line provided.

- 185, 79, 42

 Which number is largest? _____
- 83, 127, 101

 Which number is largest? _____
- 64, 180, 23

 Which number is smallest? _____
- 55, 125, 96

 Which number is smallest? _____

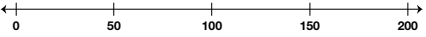
Copyright © Kendall Hunt Publishing Company

Comparing and Ordering SAB • Grade 2 • Unit 6 • Lesson 5 **295**





Student Activity Book - Page 295

Name _____ Date _____

✓ **Check-In: Question 5**

5. A. Place 49, 110, and 190 on the number line.

- B. How did you decide where to place 190?

- C. Compare each pair of numbers. Use $<$, $>$, or $=$.

	
_____ ○ _____	
	
_____ ○ _____	
- D. Write the four numbers in Question 5C in order from smallest to largest.

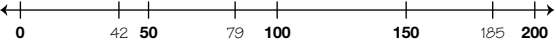
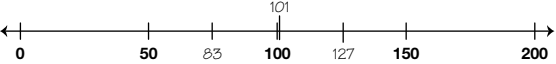
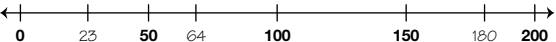
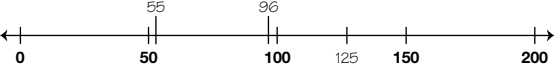
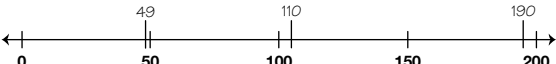
Copyright © Kendall Hunt Publishing Company

296 SAB • Grade 2 • Unit 6 • Lesson 5 Comparing and Ordering

Student Activity Book - Page 296

Walk the Number Line (SAB pp. 295–296)

Questions 1–5

1. 
185 is largest
2. 
127 is largest
3. 
23 is smallest
4. 
55 is smallest
5. A. 
 B. Possible response: 190 is ten less than 200 so I placed it close to 200.
 C. 133 $<$ 145
 220 $>$ 202
 D. 133, 145, 202, 220