

Teacher Guide

Compare Numbers at Home (TG pp. 1–3)

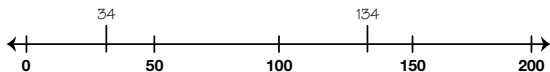
Homework

Questions 1–5

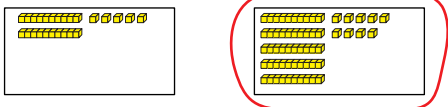
1.



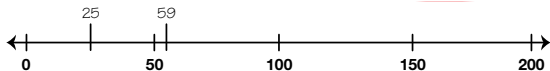
$134 > 34$



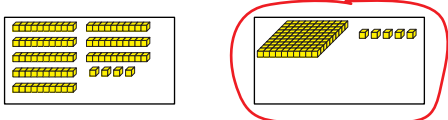
2.



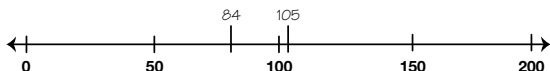
$25 < 59$



3.



$84 < 105$



Copyright © Kendall Hunt Publishing Company

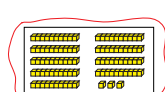
Name _____ Date _____

Compare Numbers at Home



Circle the box that shows the greatest number. Write a number sentence to compare the numbers. Use $<$ or $>$. Then place the numbers on the number line.

Example:



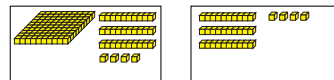
$<$ less than
 $>$ greater than
 $=$ equal to



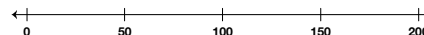
Number sentence $67 < 93$



1.



Number sentence _____



Copyright © Kendall Hunt Publishing Company

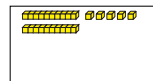
TG • Grade 2 • Unit 6 • Lesson 5

Homework Master


Teacher Guide - Page 1

Name _____ Date _____

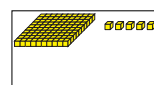
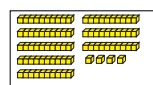
2.



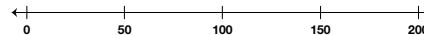
Number sentence _____



3.



Number sentence _____



Copyright © Kendall Hunt Publishing Company

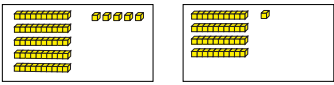
Homework Master

TG • Grade 2 • Unit 6 • Lesson 5 2

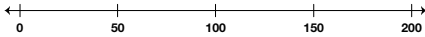
Teacher Guide - Page 2

Name _____ Date _____

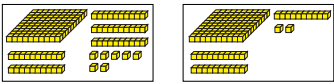
4.



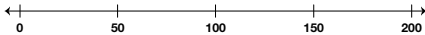
Number sentence _____



5.



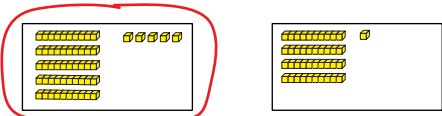
Number sentence _____



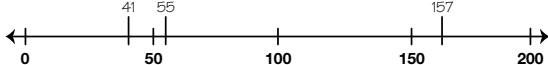
Copyright © Kendall Hunt Publishing Company

3 TG • Grade 2 • Unit 6 • Lesson 5 Homework Master


4.



$55 > 41$



5.



$157 > 132$

