


Snack Shop Bills

Estimate and calculate the total of each bill.

1.

Shooting Star Snack Shop		Customer's Name: _____
		
Item	Price (¢)	
Taco	59¢	
Large Orange Juice	85¢	
_____	_____	
Show how you estimated:		Is your total reasonable?
Total _____		_____

2.

Shooting Star Snack Shop		Customer's Name: _____
		
Item	Price (¢)	
Turkey Sandwich	99¢	
Potato Chips	25¢	
Large Lemonade	79¢	
Show how you estimated:		Is your total reasonable?
Total _____		_____

3.

Shooting Star Snack Shop		Customer's Name:
		_____ Kim
Item	Price (¢)	
Grilled Cheese Sandwich	89¢	
Carrot Sticks	29¢	
Chicken Noodle Soup	55¢	
Show how you estimated:		Is your total reasonable?
Total _____		_____

4.

Shooting Star Snack Shop		Customer's Name:
You have up to \$3.00 to spend. Choose 2–3 items.		_____
Item	Price (¢)	
_____	_____	
_____	_____	
_____	_____	
Show how you estimated:		Is your total reasonable?
Total _____		_____

5.

Shooting Star Snack Shop		Customer's Name: _____
You have up to \$2.00 to spend. Choose 2–3 items.		
Item	Price (¢)	
_____	_____	
_____	_____	
_____	_____	
Show how you estimated:		Is your total reasonable?
Total _____		_____



6.


Shooting Star Snack Shop		Customer's Name: _____
You have up to \$3.50 to spend. Choose 2–3 items.		
Item	Price (¢)	
_____	_____	
_____	_____	
_____	_____	
Show how you estimated:		Is your total reasonable?
Total _____		_____

Oops, I Spilled the Juice

Gus and Nick bought lunch at the Shooting Star Snack Shop. Gus spilled juice on their bills. The prices of the daily specials, applesauce and banana bread, were blotted out.

Use any strategies or tools to find the prices.

Shooting Star Snack Shop Bill	
Customer's Name	Gus
Item	Price (¢)
Fruit Salad Cup	65¢
Pretzels	25¢
Applesauce	
Large Orange Juice	85¢
 Total	
	\$2.04

Shooting Star Snack Shop Bill	
Customer's Name	Nick
Item	Price (¢)
Chili	75¢
Taco	59¢
Banana Bread	
Small Milk	40¢
 Total	
	\$2.23

- How much did the applesauce cost? _____
- How much did the banana bread cost? _____
- Show or tell how you found the cost of the banana bread.