

Name _____ Date _____

Unit 7: Home Practice

Part 1 Addition Flash Cards: Group E
 Take home your *Triangle Flash Cards: Group E*. Ask a family member to choose one flash card at a time for you to solve. Sort the flash cards into three piles: Facts I Know Quickly, Facts I Can Figure Out, and Facts I Need to Learn. Update your *Addition Facts I Know* chart. Clip the cards in the Facts I Know Quickly pile together and place them back into the envelope. Practice the facts in the last two piles again.

Part 2 Addition Facts Practice

A. $10 + 3 = \square$ B. $9 + 3 = \square$
 C. $10 + 4 = \square$ D. $9 + 4 = \square$
 E. $8 + 4 = \square$ F. $8 + 2 + \square = 12$
 G. $10 + 5 = \square$ H. $9 + 5 = \square$
 I. $8 + 5 = \square$ J. $8 + 2 + \square = 13$
 K. $7 + 5 = \square$ L. $10 + 1 = \square$

M. Show or tell how you solved Question K.

Copyright © Kendall Hunt Publishing Company

TG • Grade 2 • Unit 7 • Home Practice |

Teacher Guide - Page 1

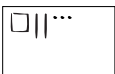
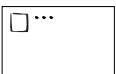
Teacher Guide



**Part 2. Addition Facts Practice (TG p. 1)
 Questions A–M**



- I. A. 13 B. 12
 C. 14 D. 13
 E. 12 F. $8 + 2 + \boxed{2} = 12$
 G. 15 H. 14
 I. 13 J. $8 + 2 + \boxed{3} = 13$
 K. 12 L. 11
- M. Possible response: I know $10 + 5 = 15$.
 $7 + 5$ is three less. $7 + 5 = 15 - 3$ or 12 .
 $7 + 3 = 10$, so $7 + 3 + 2 = 12$.



Name _____ Date _____



Part 3 Greater Than or Less Than
 Draw or write the numbers below. Use base-ten shorthand. Compare each pair of numbers using $<$, $>$, or $=$.

Example  $123 > 103$ 

1.  $43 \bigcirc 423$ 

2.  \bigcirc 

3.  $56 \bigcirc$ 

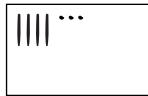
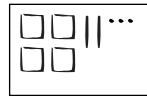
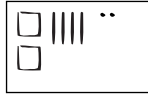
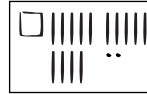




4.  $103 \bigcirc 96$ 

Copyright © Kendall Hunt Publishing Company

2 TG • Grade 2 • Unit 7 • Home Practice


Teacher Guide - Page 2

**Part 3. Greater Than or Less Than (TG p. 2)
 Questions 1–4**


1.  $43 < 423$ 
2.  $242 = 242$ 
3.  $56 > 46$ 
4.  $103 > 96$ 

Part 4. Time (TG p. 3)
Questions 1–2

1.



Jackie left home at 4:00

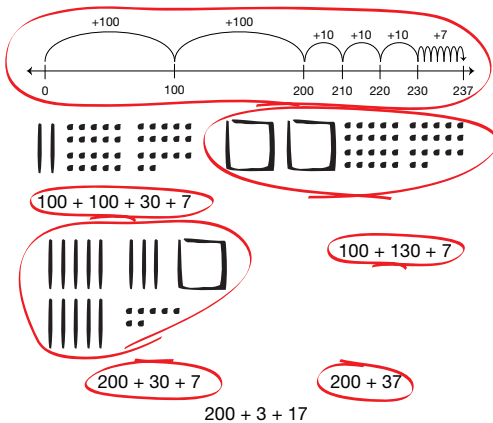


Time she arrived at skating rink 4:30

2. Answers will vary. One possible response: Sara will not have enough time because she arrived at the skating rink at 4 o'clock. If she goes home, it will be almost 4:30. She will not have enough time to get back to the skating rink by 4:30.

Part 5. Many Ways to Show a Number (TG p. 4)
Questions 1–2

1.



2. Possible responses:



Copyright © Kendall Hunt Publishing Company

Name _____ Date _____

Part 4 Time

1. Jackie lives 30 minutes away from the ice-skating rink. She is meeting her friends Sara and Rosa there at 4:30. At what time does she have to leave home in order to be at the rink on time? Draw both times on the clocks below.

Time Jackie left home

Time she arrived at skating rink

2. Sara arrived at the rink at 4 o'clock but realized she forgot her skates. She lives near Jackie but it does not take her quite as long to get to the skating rink. Do you think she has time to go home and still make it back to the rink before 4:30? Explain.

TG • Grade 2 • Unit 7 • Home Practice 3

Teacher Guide - Page 3

Name _____ Date _____

Part 5 Many Ways to Show a Number

1. Circle the ways to show 237.

100 + 100 + 30 + 7

100 + 130 + 7

200 + 30 + 7

200 + 3 + 17

2. Show 237 another way.

TG • Grade 2 • Unit 7 • Home Practice 4

Teacher Guide - Page 4

Part 6. Money (TG p. 5)

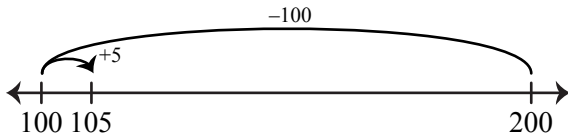
Questions 1–2

1. 95¢; Pictures or words will vary. Possible strategy:



2. 105¢ or \$ 1.05; $50¢ + 45¢ = 95¢$; which is almost a dollar.

One possible response:



Name _____ Date _____

Part 6 Money

Show or tell how to solve each problem.

1. Jessie has \$1.50 to spend at the skating rink. Skate rental costs 55¢. How much money will Jessie have left to spend?

2. Rosa has \$2.00 to spend at the rink. She bought a cup of hot chocolate for 50¢ and a warm pretzel for 45¢. How much money will Rosa have left?

Copyright © Kendall Hunt Publishing Company