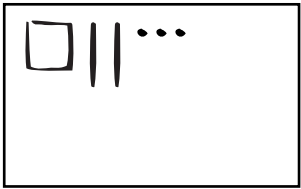


Part 3 Greater Than or Less Than

Draw or write the numbers below. Use base-ten shorthand. Compare each pair of numbers using $<$, $>$, or $=$.

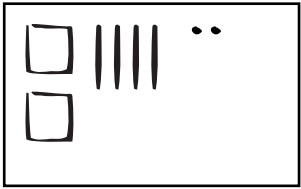
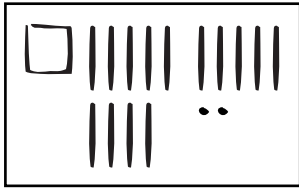
Example

			123	<input checked="" type="radio"/>	103	
--	---	--	-----	----------------------------------	-----	---


1.

			43	<input type="radio"/>	423	
--	--	--	----	-----------------------	-----	--

2.

			—	<input type="radio"/>	—	
--	--	--	---	-----------------------	---	--

3.

			56	<input type="radio"/>	—	
--	--	--	----	-----------------------	---	---

4.

			103	<input type="radio"/>	96	
--	--	--	-----	-----------------------	----	--

Copyright © Kendall Hunt Publishing Company