

Teacher Guide

Snack Shop Carryout (TG pp. 1–2)


Homework

Questions 1–3

1. Bills will vary.
2. $89¢ + 25¢$ is about $90 + 20 + 5 = 115¢$;
 $89¢ + 25¢ = 114¢$ or \$1.14.
3. $79¢ + 29¢ + 55¢$ is about $80¢ + 30¢ + 50¢$
or $160¢$; $79¢ + 29¢ + 55¢ = 163¢$ or \$1.63

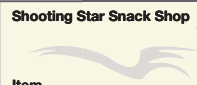

Name _____ Date _____

Snack Shop Carryout



Using the *Shooting Star Snack Shop Children's Menu* from the *Student Activity Book*, choose 2–3 items and make up your own problem on the bill below. Show how you estimated and found your answer.

1. A.

Shooting Star Snack Shop		Customer's Name: Diana _____
		
Item	Price (¢)	
_____	_____	
_____	_____	
_____	_____	
Show how you estimated:		Is your total reasonable?
Total _____		_____

B. Show or tell how you found the sum.



Copyright © Kendall Hunt Publishing Company

Homework Master TG • Grade 2 • Unit 7 • Lesson 8 |



Teacher Guide - Page 1

Name _____ Date _____

2.

Shooting Star Snack Shop		Customer's Name: Levi _____
		
Item	Price (¢)	
Grilled Cheese Sandwich	_____	
Potato Chips	_____	
_____	_____	
Show how you estimated:		Is your total reasonable?
Total _____		_____

3.

Shooting Star Snack Shop		Customer's Name: Nisha _____
		
Item	Price (¢)	
Pizza Slice	_____	
Carrot Sticks	_____	
Small Lemonade	_____	
_____	_____	
Show how you estimated:		Is your total reasonable?
Total _____		_____

Copyright © Kendall Hunt Publishing Company

2 TG • Grade 2 • Unit 7 • Lesson 8 Homework Master

Teacher Guide - Page 2