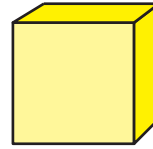




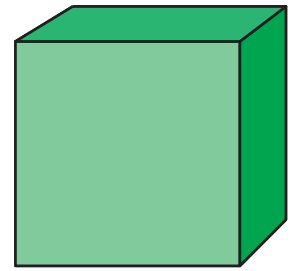
Check-In: Questions 11–12

11.A. Do the objects have the same shape? _____

B. Are the objects the same size? _____



A

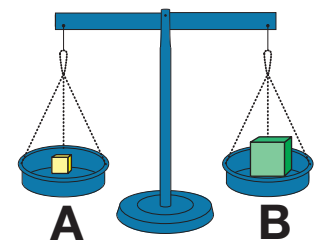
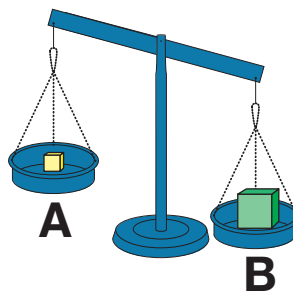
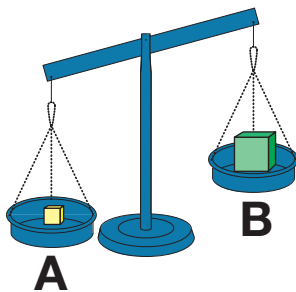


B

C. Can you tell which one has more mass? Explain.

12. Object A is made of wood and Object B is made of steel.

A. Circle the picture that shows what will happen if you placed the two cubes on the two-pan balance.



Copyright © Kendall Hunt Publishing Company

B. Fill in the circle with $>$, $<$, or $=$ to make the statement true.

Object A's Mass Object B's Mass