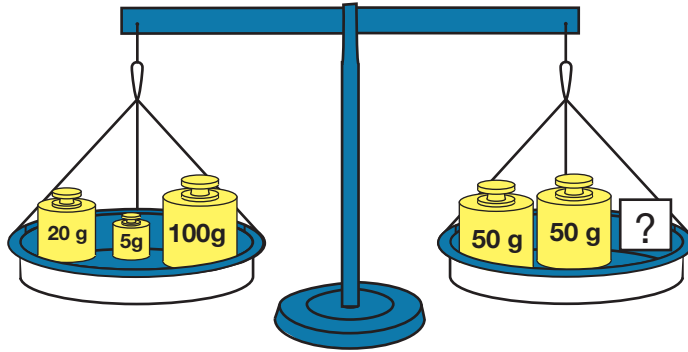


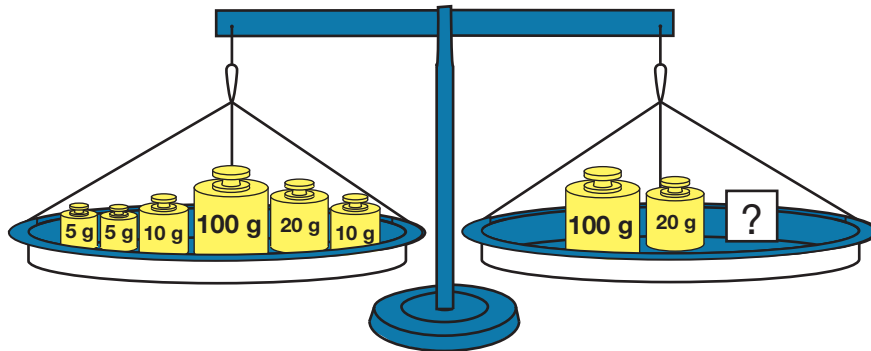
5. What will make the two pans balance?

A.



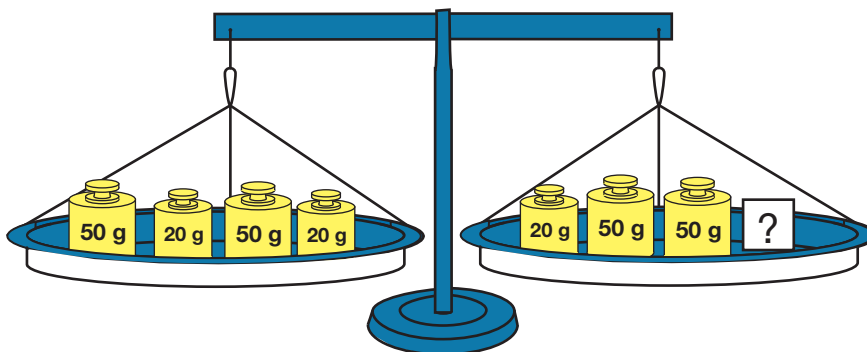
$$20 + 5 + 100 = 50 + 50 + \underline{\hspace{2cm}}$$

B.



$$5 + 5 + 10 + 100 + 20 + 10 = 100 + 20 + \underline{\hspace{2cm}}$$

C.



$$50 + 20 + 50 + 20 = 20 + 50 + 50 + \underline{\hspace{2cm}}$$